

SESSION : 10
CLASS : 3
SUBJECT : MATHEMATICS
CHAPTER NUMBER: 10
CHAPTER NAME : TIME
SUBTOPIC : DOUBT CLEARING & CLASS TEST

CHANGING YOUR TOMORROW

TIME

DOUBT CLEARING & CLASS TEST

**Doubt clearing and class test
in test notebook.**



MATHS

TIME

DOUBT CLEARING & CLASS TEST

1. Fill up :

2

A. Complete the following statements by filling a.m. or p.m.

1. I wake up at 7 _____ in the morning.
2. I do my homework at 6 _____.

B. What will be the time after 4 hours of the following time.

3. mid-night _____.
4. 11 a.m. _____.

TIME


DOUBT CLEARING & CLASS TEST

2. Do as directed :

A. Draw the hands to show the given time :


4

1.



Quarter past 10

2.



Quarter to 3

TIME

DOUBT CLEARING & CLASS TEST

B. Convert the following time to 24 hour clock time.

2

1. 7 p.m. _____

2. 10 p.m. _____

C. Convert the following time to 12 hour clock time.

3

1. 15 : 00 _____

2. 18 : 00 _____

3. 23 : 00 _____

TIME

DOUBT CLEARING & CLASS TEST

D. Convert the given number of days and hours into hours.

2

3 days 6 hours

E. Convert the given number of hours and minutes into minutes .

2

6 hours 30 minutes

TIME

MULTIPLICATION TABLE 19, DOUBT CLEARING & CLASS TEST

ANSWERS

1. Fill up :**2****A. Complete the following statements by filling a.m. or p.m.**

1. I wake up at 7 a.m. in the morning.
2. I do my homework at 6 p.m..

B. What will be the time after 4 hours of the following time.

3. mid-night 4 a.m..
4. 11 a.m. 3 p.m..

TIME


MULTIPLICATION TABLE 19, DOUBT CLEARING & CLASS TEST

1. Do as directed :

A. Draw the hands to show the given time :


4

1.



Quarter past 10

2.



Quarter to 3

TIME

MULTIPLICATION TABLE 19, DOUBT CLEARING & CLASS TEST

B. Convert the following time to 24 hour clock time.

2

1. 7 p.m. $7 + 12 = 19 : 00$

2. 10 p.m. $10 + 12 = 22 : 00$

C. Convert the following time to 12 hour clock time.

3

1. 15 : 00 $15 - 12 = 3 \text{ p.m.}$

2. 18 : 00 $18 - 12 = 6 \text{ p.m.}$

3. 23 : 00 $23 - 12 = 11 \text{ p.m.}$

D. Convert the given number of days and hours into hours.

2

1. 3 days 6 hours

Since 1 day = 24 hours

so, 3 days = 3×24 hours

= 72 hours

Thus, 3 days 6 hours = 72 hours + 6 hours

= 78 hours

E. Convert the given number of hours and minutes into minutes .**2**

1. 6 hours 30 minutes


Since 1 hour = 60 minutes

**so, 6 hours = 6×60 minutes
= 360 minutes**

**Thus, 6 hours and 30 minutes = 360 minutes + 30 minutes
= 390 minutes**

TIME

MULTIPLICATION TABLE 19, DOUBT CLEARING & CLASS TEST



LEARNING OUTCOME:

Children are able to solve a multiplication operation using mathematical table , understand mathematical learning and tend to be more self-assured when learning new concepts.

THANKING YOU
ODM EDUCATIONAL GROUP