

SESSION : 9

CLASS :V

SUBJECT : (SOCIAL SCIENCE)

CHAPTER NUMBER: 5

CHAPTER NAME : DRC - The Land of Dense Forest

SUBTOPIC : Class Test & Map Work

CHANGING YOUR TOMORROW

LEARNING OBJECTIVES:

Children will :

- 1.Enhance their talent**
- 2.Sharpen their mind.**

3. CONTINENTS

WORLD POLITICAL



Map not to the scale

1. Colour the continents with different colour-

- a) N. America
- b) Australia
- c) Africa
- d) Antarctica

3. CONTINENTS

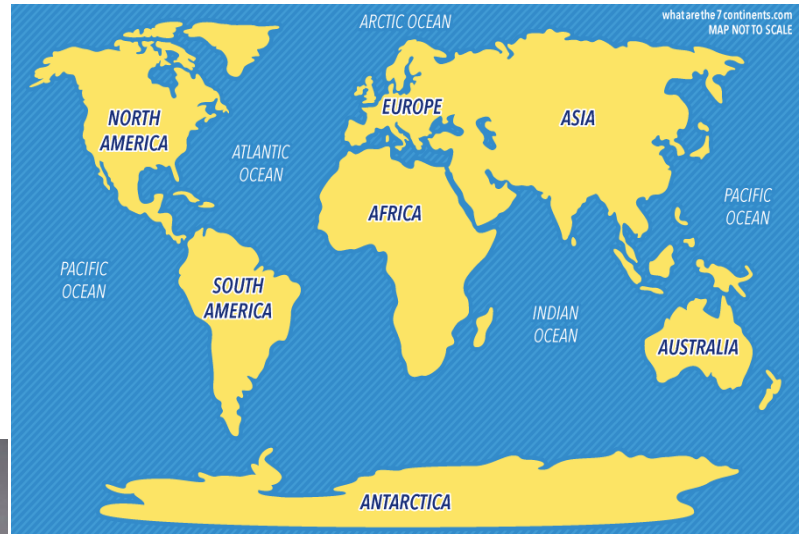
WORLD POLITICAL



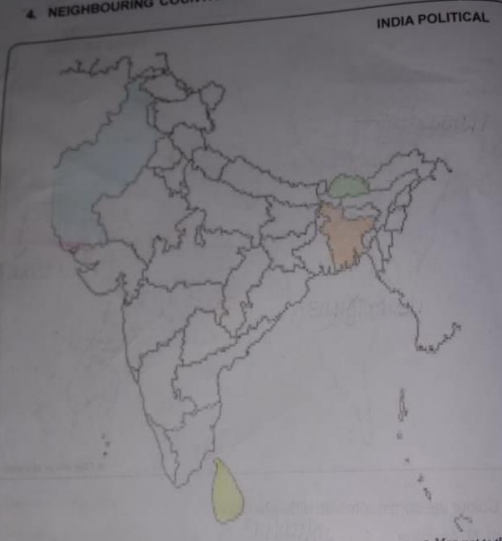
Map not to the scale

1. Colour the continents with different colour-

- a) N. America
- b) Australia
- c) Africa
- d) Antarctica



4. NEIGHBOURING COUNTRIES INDIA POLITICAL



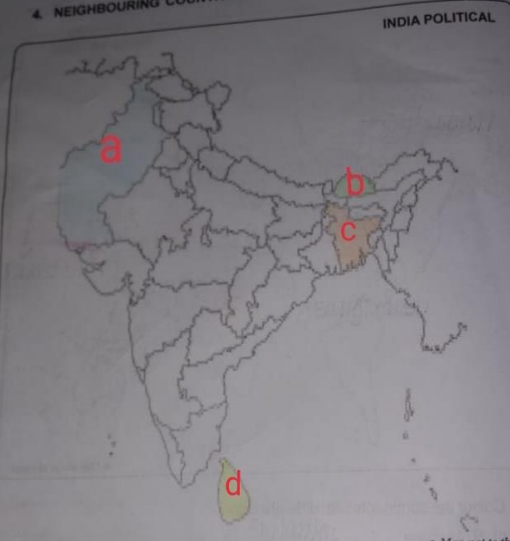
● Map not to the

1. Indicate the following features in the Outline Map-

- a) Pakistan
- b) Bhutan
- c) Bangladesh
- d) Sri Lanka

Detailed description: This is an outline map of India and its neighboring countries. The map is titled '4. NEIGHBOURING COUNTRIES INDIA POLITICAL'. It shows the political boundaries of India and its neighbors: Pakistan to the west, Afghanistan to the northwest, Nepal and Bhutan to the north, Bangladesh to the east, and Sri Lanka to the south. The map is mostly grey with some colored markers: a red 'a' in Pakistan, a red 'b' in Bhutan, a red 'c' in Bangladesh, and a red 'd' in Sri Lanka. A small note at the bottom right says '● Map not to the'.

4. NEIGHBOURING COUNTRIES INDIA POLITICAL



● Map not to the

1. Indicate the following features in the Outline Map-

- a) Pakistan
- b) Bhutan
- c) Bangladesh
- d) Sri Lanka

Detailed description: This is an outline map of India and its neighboring countries, identical to the first map. It is titled '4. NEIGHBOURING COUNTRIES INDIA POLITICAL'. The map shows the political boundaries of India and its neighbors: Pakistan to the west, Afghanistan to the northwest, Nepal and Bhutan to the north, Bangladesh to the east, and Sri Lanka to the south. The map is mostly grey with some colored markers: a red 'a' in Pakistan, a red 'b' in Bhutan, a red 'c' in Bangladesh, and a red 'd' in Sri Lanka. A small note at the bottom right says '● Map not to the'.



AFGHANISTAN

PAKISTAN

INDIA

NEPAL

BHUTAN

BANGLADESH

SRI LANKA

Detailed description: This is a color-coded map of India and its neighboring countries. The map shows the political boundaries of India and its neighbors: Pakistan to the west, Afghanistan to the northwest, Nepal and Bhutan to the north, Bangladesh to the east, and Sri Lanka to the south. The map is color-coded: Afghanistan is yellow, Pakistan is green, India is light yellow, Nepal is light green, Bhutan is light blue, Bangladesh is orange, and Sri Lanka is dark green. Labels with lines pointing to the respective countries are: 'AFGHANISTAN', 'PAKISTAN', 'INDIA', 'NEPAL', 'BHUTAN', 'BANGLADESH', and 'SRI LANKA'.

CLASS TEST:

A. Define the following words:

(1X4=4)

1. Savannah
2. Canopy
3. Pygmies
4. Tribe

B. Write in one word:

(1X6=6)

1. The trees of the forest are covered with leaves throughout the year.
2. The only country in the world in which bonobos are found in the wild.
3. The dwarf chimpanzees found in DRC.
4. An insect found in the forest of DRC that causes the dreaded sleeping sickness.
5. The capital of DRC.
6. Sent to another country for sale.

C. Answer the following questions:

(2X5=10)

1. Write the location and extent of the DRC.
2. Why is the climate of the DRC hot and humid?
3. Describe the way pygmies live.
4. Name any four common trees grown in the DRC.
5. Name any two countries with which DRC shares its boundaries.

CLASS TEST:

(1X4=4)

A. Define the following words:

1. Savanna-

Ans. A large area of grassland with scattered trees, found in southern part of DRC.

2. Canopy-

Ans. Branches of trees that spread over an area like a roof.

3. Pygmies-

Ans. People of less than average height who mainly live in Central Africa and South-east Asia in Negritos.

4. Tribe-

Ans. A large group of people who live in the same area and share a common language, religion and customs.

B. Write in one word:

(1X6=6)

- 1.The trees of the forest are covered with leaves throughout the year - **EVERGREEN FOREST**
- 2.The only country in the world in which bonobos are found in the wild - **DRC**
- 3.The dwarf chimpanzees found in DRC - **BONOBOS**
- 4.An insect found in the forest of DRC that causes the dreaded sleeping sickness - **TSETSE FLY**
- 5.The capital of DRC - **KINSHASA**
- 6.Sent to another country for sale - **EXPORT**

C. Answer the following questions:

(2X5=10)

1. Write the location and extent of the DRC.

Ans. The Democratic Republic of Congo (DRC) is a country located deep in the heart of the African continent. It lies in the Torrid Zone.

2. Why is the climate of the DRC hot and humid?

Ans. As DRC is near the Equator, the climate in most parts of the DRC is hot and humid throughout the year.

3. Describe the way pygmies live.

Ans. Life style of pygmies

- They hunt animals and gather plant foods for their food.
- They live in huts made of branches and leaves with thatched roof.

4. Name any four common trees grown in the DRC.

Ans. Ebony, redwood, rubber, mahogany

5. Name any two countries with which DRC shares its boundaries.

Ans. Uganda, Rwanda, Burundi, Tanzania

HW
Do Worksheet no. 1 to 4

LEARNING OUTCOME:

By the end of the class, children will be able to:

1. Know the difference between weather and climate of our area and tropical zone area.
2. Know how location of a place affects the climate of that place.

THANKING YOU
ODM EDUCATIONAL GROUP