

SESSION : 4

CLASS :V

SUBJECT : (SOCIAL SCIENCE)

CHAPTER NUMBER: 2

CHAPTER NAME : MAPS

SUBTOPIC : Short Q & A

CHANGING YOUR TOMORROW

LEARNING OBJECTIVE

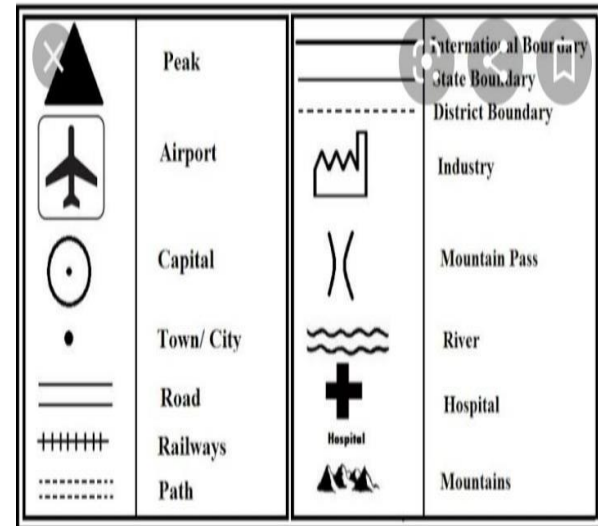
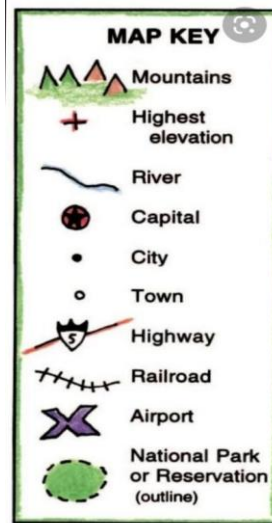
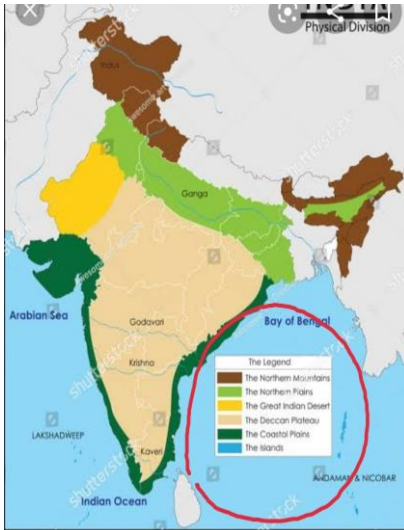
Children will come to know:

- 1.All minute details about Map
- 2.About Map
3. All details about map

RECAPITULATION:

Elements of a map:

- Directions/ Orientation
- Scale
- Colour
- Symbols





CLASS WORK:

A.Fill in the blanks.

- 1.An _____ is a book of maps.
- 2.The ratio of distance on a map to actual distance is known as the _____ of the map.
- 3.On a map, high mountains are shown in _____.
- 4.On a map, the use of the colour blue shows _____.
- 5.Shapes or signs used to represent features on a map are called _____.
- 6.On a map drawn to a scale of 1 cm : 100 kilometres, a distance of five centimetres on the map means an actual distance of _____.
- 7.If north is at the top in a map, west is to the _____.

B.Match the columns.

- | | | |
|---|---|-----------------------------------|
| 1.Arrow marked N on map | → | a. Green |
| 2.1 centimetre : 1 Kilometre | → | b. Bridge |
| 3.Plains | → | c. North |
| 4.  | → | d.Map scale |
| 5.  | → | e. Boundary between two countries |

- A.1. Atlas
 - 2.Scale
 - 3.Dark brown
 - 4.Water bodies
 - 5.Symbol
 - 6.500 Kilometres
 - 7.Left
- B.1. c. North
 - 2.d. Map Scale
 - 3.a. Green
 - 4.e. Boundary between two countries
 - 5.b. Bridge

MULTIPLE CHOICE QUESTIONS

- Which of these maps will always have some errors?
a. map of your house b. map of your school
c. map of your neighbourhood **d. map of the world**
- What does a political map show?
a. features such as mountains, plains and rivers
b. roads, railways and airline routes
c. boundaries of countries, states and important cities
d. number of seats won by political parties in an election
- On a map, 1000 km is shown as 1 cm. The scale of the map is:
a. 1000 kilometre:1 centimetre **b. 1 centimetre:1000 kilometre**
c. 100 kilometre:1 centimetre d. 1 centimetre:100 kilometre
- Blue colour in a map always shows:
a. plain land b. hills **c. water bodies** d. marshy land
- Which of these symbols represents a boundary between countries?



SUMMING UP:

- **THE GLOBE AND MAPS**
- **WHAT IS A MAP?**
- **DIFFERENT TYPES OF MAPS**
- **ELEMENTS OF A MAP**

DID YOU KNOW?

MERCATOR WAS ALSO THE FIRST TO USE AND POPULARISE THE CONCEPT OF THE ATLAS.



WHAT THEY
INDICATE

Identify the symbols:

1.



2.



3.



4.




5.



	Peak		International Boundary
	Airport		State Boundary
	Capital		District Boundary
	Town/ City		Industry
	Road		Mountain Pass
	Railways		River
	Path		Hospital
			Mountains


6.



7.



8.



9.



10.



11.



	Peak		International Boundary
	Airport		State Boundary
	Capital		District Boundary
	Town/ City		Industry
	Road		Mountain Pass
	Railways		River
	Path		Hospital
			Mountains

12.



13.




14.



Hospital

15.



	Peak		International Boundary
	Airport		District Boundary
	Capital		Industry
	Town/ City		Mountain Pass
	Road		River
	Railways		Hospital
	Path		Mountains

HOME WORK:

DO THE SHORT Q & A IN NOTEBOOK, DRAW SOME STANDARD SYMBOLS USED IN MAPS IN THE NOTEBOOK

LEARNING OUTCOME:

By the end of the class, children will be able to:

1. Know the difference between globe and map.
 2. Identify different kinds of maps.
- Identify different elements used in maps.

THANKING YOU
ODM EDUCATIONAL GROUP