

CLASS : I
SUBJECT : MATHEMATICS
CHAPTER NUMBER: 11
CHAPTER NAME : MEASUREMENT
SUBTOPIC : TIME AND CLOCK
DURATION

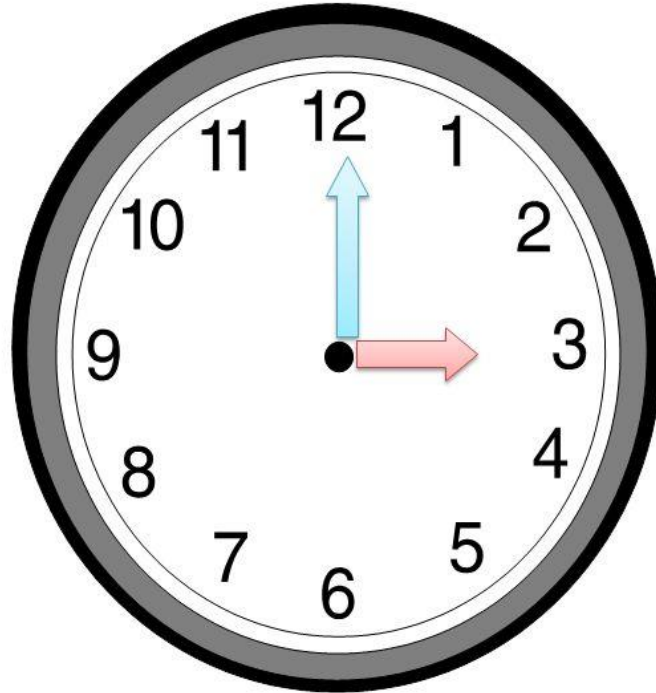
CHANGING YOUR TOMORROW

The Hands of Time


The clock has two hands:

➤ The long hand is the minute hand

➤ The short hand is the hour hand:



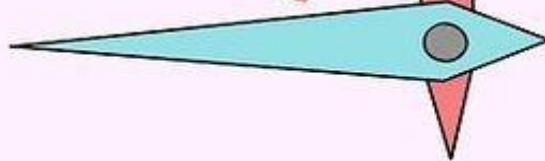
RECAPITULATION



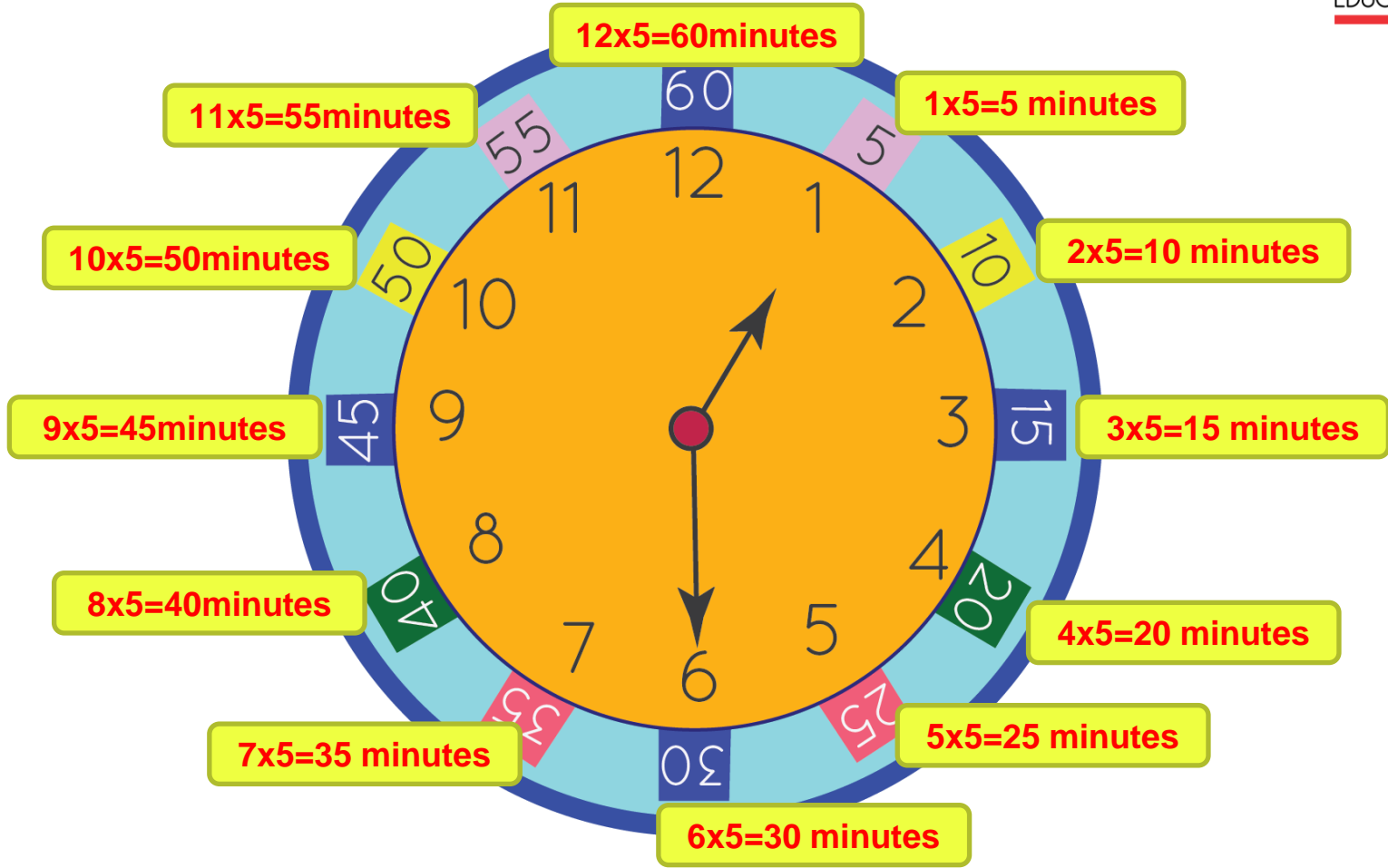
long



short



CLOCK WITH MINUTES



RECAPITULATION



2:00



5:00



12:00



3:00



7:00



8:00



1:00



4:00



11:00

ACTIVITY

Class work in Note book

SHORT DURATION AND LONG DURATION.

1. Classify the daily activities of Rohit as short or long duration events.

a. Rohit takes his breakfast at 7 O'clock.

Short

b. Rohit has classes from 9 O'clock to 2 O'clock in the afternoon.

Long

c. Rohit plays from 4 O'clock to 6 O'clock in the evening.

Long

d. Rohit has his dinner at 9 O'clock.

Short

e. Rohit goes to bed at 10 O'clock.

Long

2. Write two earlier activities of Rohit in the day.

Ans: Taking breakfast, going to school

3. Mention any three later activities of Rohit.

Ans: Taking dinner, doing home work and going to bed.

4. Write any three activities which take you longer duration.

Ans: 1. Sleeping at night 2. Attending classes at school 3. Watching movie

5. Mention any three activities which you do within a short duration.

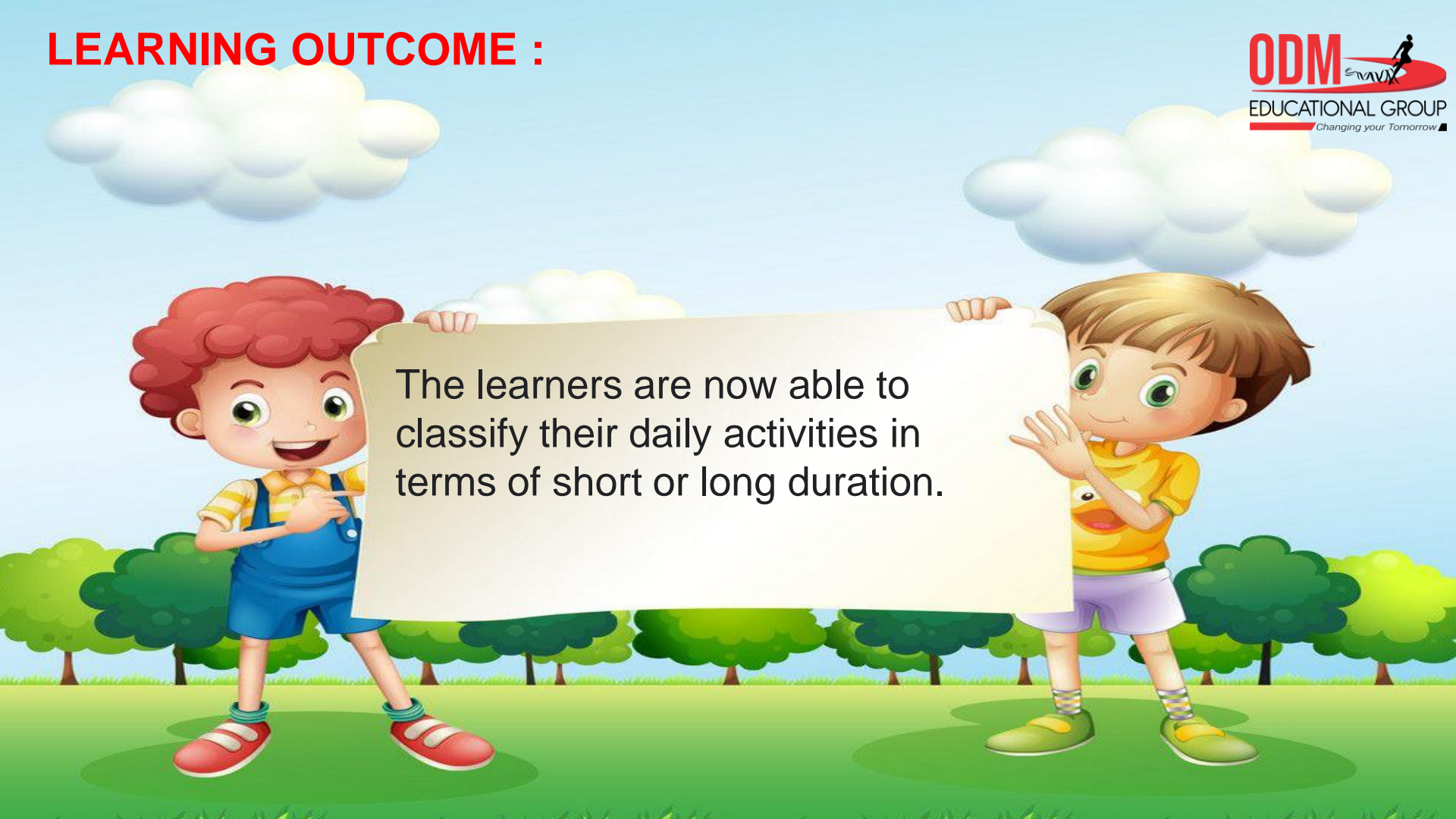
Ans: 1. Brushing teeth 2. Taking breakfast 3. Taking bath.

SUB

HOME ASSIGNMENT

Mathematics

LEARNING OUTCOME :



The learners are now able to classify their daily activities in terms of short or long duration.

THANKING YOU
ODM EDUCATIONAL GROUP