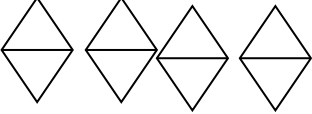

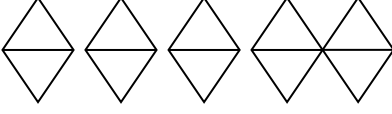






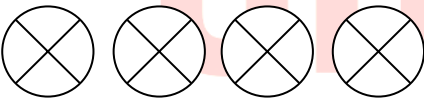

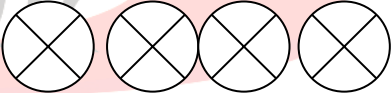


**REVISION WORKSHEET-4**

**Date –30.09.2**

**CLASS ASSIGNMENT**

**Q1. Count, write and put the correct symbol (<, > or =).**

**Q2. Put the correct symbol (<, > or =).**

34 \_\_\_\_\_ 23

56 \_\_\_\_\_ 65

29 \_\_\_\_\_ 29

41 \_\_\_\_\_ 14

72 \_\_\_\_\_ 83

**ORAL**

Say greater than , less than or equal to for the given sets

67 is  23

82 is  94

34 is  34

22 is  29

64 is  42

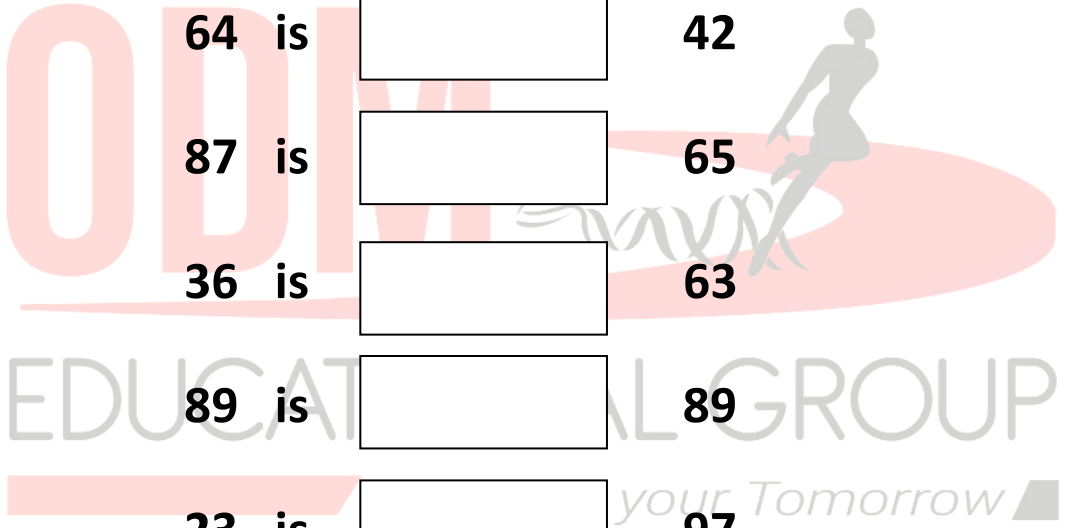
87 is  65

36 is  63

89 is  89



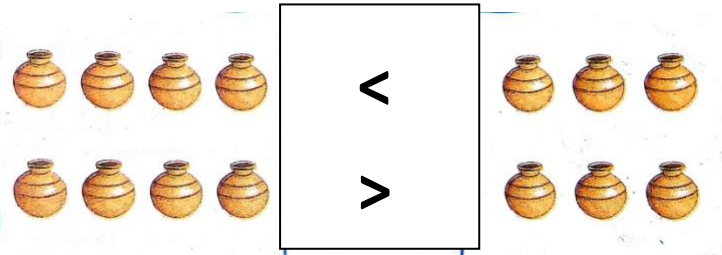
23 is  97

67 is  53



**HOME ASSIGNMENT- 30.9.21**

**Q1. Count and circle the correct symbol.**



**Q2. Put tick ✓ for the correct answer and cross out X for the wrong answer.**

34 > 23

56 > 64

78 = 78

21 > 62

90 < 54

84 > 76