

**SESSION : 4**

**CLASS : I**

**SUBJECT : MATHEMATICS**

**CHAPTER NUMBER:6**

**CHAPTER NAME :ADDITION**

**SUBTOPIC : 6.3 ADDITION OF THREE, 2-DIGIT NUMBERS  
(WITHOUT CARRY OVER)**

**CHANGING YOUR TOMORROW**

Website: [www.odmegroup.org](http://www.odmegroup.org)  
Email: [info@odmps.org](mailto:info@odmps.org)

Toll Free: **1800 120 2316**

Sishu Vihar, Infocity Road, Patia, Bhubaneswar- 751024

## LEARNING OBJECTIVE :

Learners will be able to know how to add Three , 2-digit numbers without carry over by using different methods.

**LET'S HAVE A QUICK RECAP**

# KEY WORDS FOR ADDITION

SUM

INCREASE

ADD

ADDITION

MORE


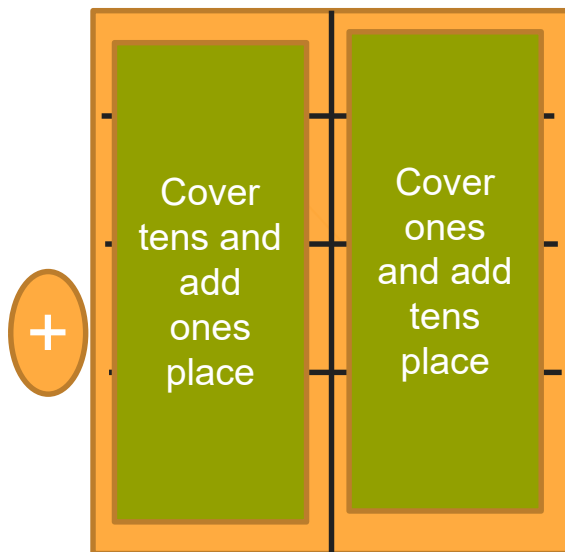
TOGETHER

PLUS



# ADDITION OF TWO 2-DIGIT NUMBERS

## Add 56 and 23



Step 1 – Add ones column digits first and write the answer in ones column

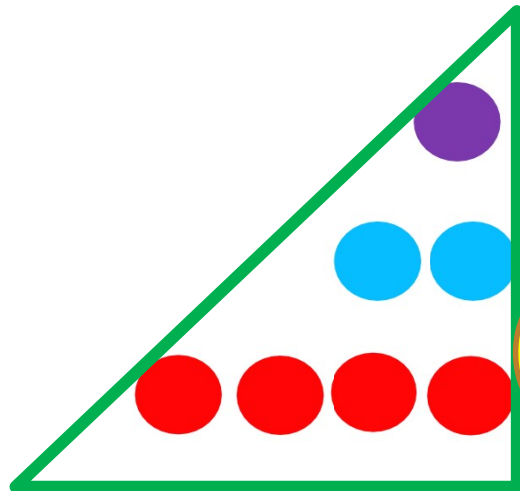
Step 2 – Add tens column digits next and write the answer in tens column

$$\text{So, } 56 + 23 = 79$$

# ADDITION OF THREE 2-DIGIT NUMBERS (WITHOUT CARRY OVER)


# ADDITION OF THREE 2-DIGIT NUMBERS

Add 13, 25 and 41



T	O
1	3
2	5
4	1
7	9

Step 2 – Add tens column digits next and write the answer in tens column



So,  $13 + 25 + 41 = 79$

# STORY TIME

One day ,three friends  
Tina, Kitu and Javed  
Wanted to go for fishing with Tina's Father





# STORY TIME

Tina's Father taught them how to catch fish

Now three friends are very excited  
and started to catch fish




After fishing they all came back home and counted all the fish.

Tina caught 13, Kitu caught 21 and Javed caught 15 fish.

Father asked Tina to count all the fish together.



So, let's add the fish together



T	O
1	3
2	1
1	5
4	9

So, all of them caught 49 fish together.  
They enjoyed fishing.

# ACTIVITY -1

Add the following numbers.

$$\begin{array}{r} 23 \\ + 32 \\ \hline \end{array}$$

98

95

59

96

# TODAY'S CLASS WORK

# c.w Do in Maths Note Book (copy)

## Exercise

Add the following :

1)

	T	O
	1	1
	1	5
+	2	2

4 8

2)

	T	O
	2	0
	1	5
+	1	4

4 9

3)

	T	O
	3	1
	1	0
+	1	5

5 6

## c.w Do in Maths Note Book (copy)

4)

$$\begin{array}{r} \text{T} \quad \text{O} \\ 2 \quad 2 \\ 3 \quad 0 \\ + 2 \quad 0 \end{array}$$

7 2

5)

$$\begin{array}{r} \text{T} \quad \text{O} \\ 4 \quad 0 \\ 2 \quad 2 \\ + 2 \quad 1 \end{array}$$

8 3

6)

$$\begin{array}{r} \text{T} \quad \text{O} \\ 7 \quad 0 \\ 1 \quad 0 \\ + 1 \quad 1 \end{array}$$

9 1

<b>SUB</b>	<b>HOME ASSIGNMENT</b>
<b>Mathematics</b>	<b>Practice book page 49 (Any 5 sums)</b>



## LEARNING OUTCOME :

The learners are now able to know how to add 1-digit numbers with a 2- digit number and two 2- digit numbers.

**THANKING YOU**  
**ODM EDUCATIONAL GROUP**

