

CLASS : I

SUBJECT : MATHEMATICS

CHAPTER NUMBER: 9 AND 10

CHAPTER NAME : MULTIPLICATION AND DIVISION

SUBTOPIC :REVISION 2

CHANGING YOUR TOMORROW

Do as directed

1. Observe and fill in the blanks.

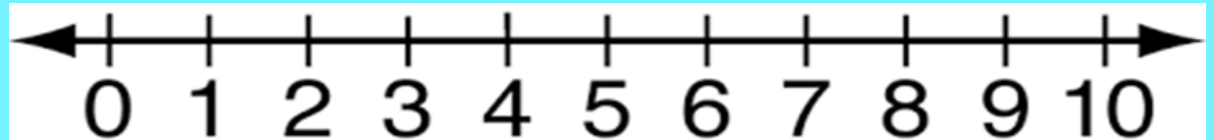


 mushrooms are shared equally
among groups.

There are mushrooms in each group.

2. Complete the division using the number line.

$$10 \div 2 = \underline{\quad}$$



3. Multiply the following.

T	O
6	3
×	5

4. Solve questions.

There are 4 fish in a pond. How many fish are there in 5 such ponds?

Sol: Number of fish in a pond =

Number of ponds =

Total fish = × = fish

So, there are fish in all.

ANSWERS

Do as directed

1. Observe and fill in the blanks.

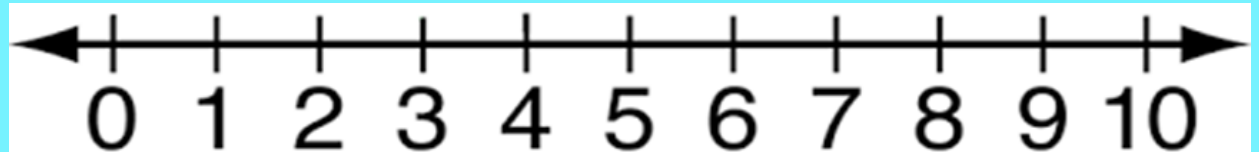


8 mushrooms are shared equally
among 4 groups.

There are 2 mushrooms in each group.

2. Complete the division using the number line.

$$10 \div 2 = \underline{5}$$



3. Multiply the following.

T	O
6	3
×	5
31	5

4. Solve questions.

There are 4 fish in a pond. How many fish are there in 5 such ponds?

Sol: Number of fish in a pond = 4

Number of ponds = 5

Total fish = $5 \times 4 = 20$ fish

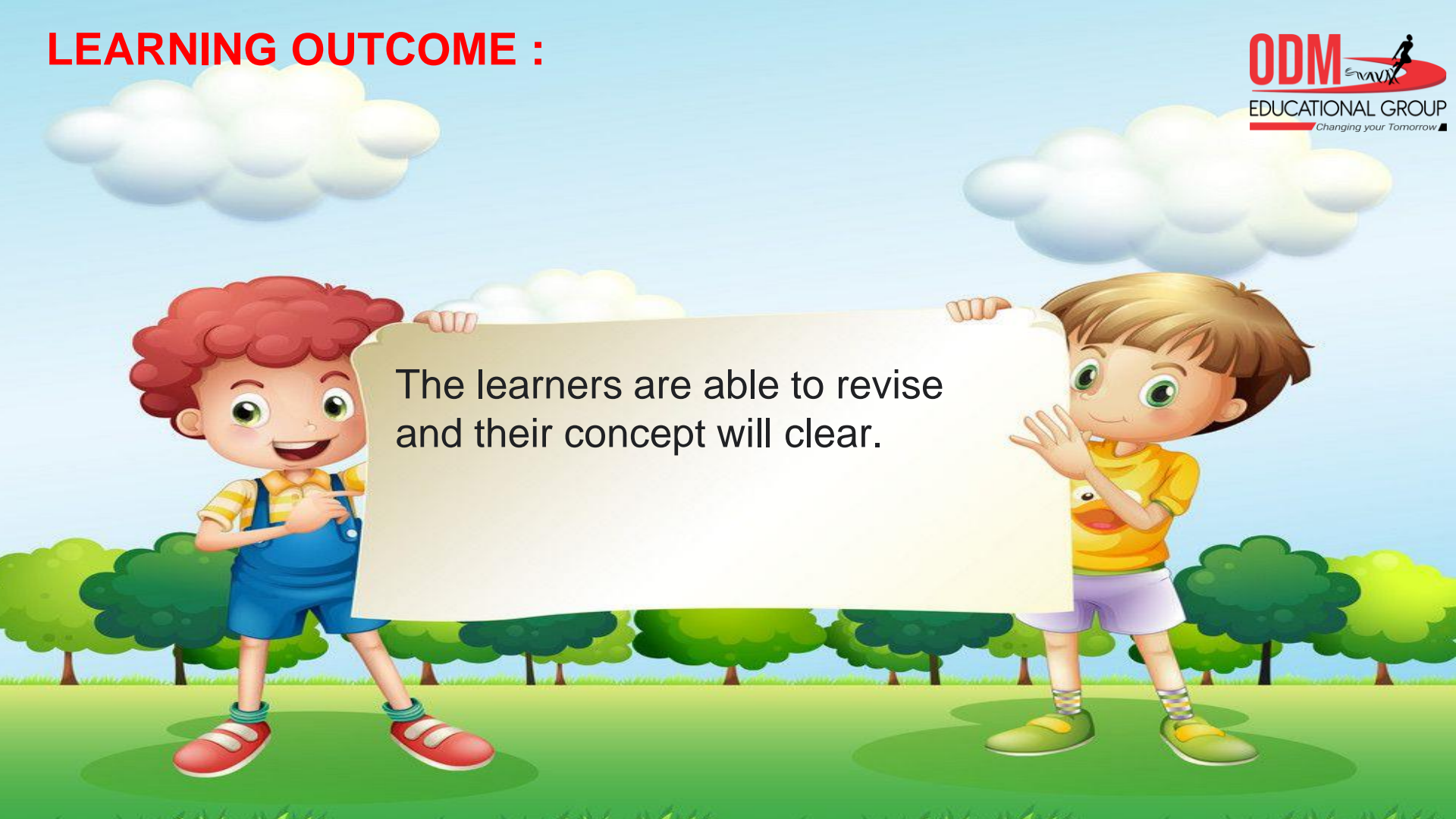
So, there are 20 fish in all.

SUB

HOME ASSIGNMENT

Mathematics

LEARNING OUTCOME :



The learners are able to revise
and their concept will clear.

THANKING YOU
ODM EDUCATIONAL GROUP