

SESSION : 20
CLASS : IV
SUBJECT : MATHEMATICS
CHAPTER NUMBER : 15
CHAPTER NAME : TIME AND CALENDAR
SUBTOPIC : LET'S RECALL, EX-15 A , ACTIVITY

CHANGING YOUR TOMORROW

LEARNING OBJECTIVE

- Enable the students to understand about the clock and also recall about the time.

TIME AND CALENDAR

Second Hand


Minute Hand

Hour Hand

In a clock there are two hand and they are :-



TIME AND CALENDAR




In a day how many hours are there?

There are 24 hours in a day.



TIME AND CALENDAR




How many minutes are there in 1 hour?

There are 60 minutes in an hour.



TIME AND CALENDAR



How many seconds are there in a minute?

There are 60 seconds in a minute.



TIME AND CALENDAR



There are 3600
seconds in a hour.

How many
seconds are there
in 1 hour?



TIME AND CALENDAR

Lets Recall


- (a) There are 24 hours in a day.
- (b) In a clock, the smaller hand is called the hour hand and the bigger hand is called the minute hand.
- (c) The minute hand takes 24 complete rounds in 1 day.
- (d) The hour hand takes 2 complete rounds in 1 day.



TIME AND CALENDAR

Lets Recall

So far, we have learnt how to tell the time when the minute hand is at 15, 30, 45, and 60 minutes. Let us revise.



The minute hand is at 3.

the hour hand is close to 4.

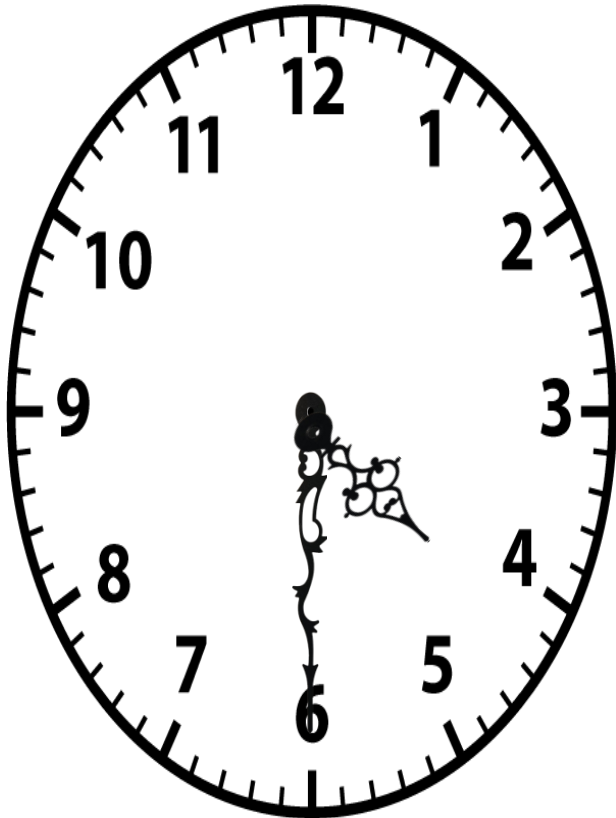
the time is 4:15 or quarter past 4, i.e.

15 minutes have passed since 4:00.

TIME AND CALENDAR

Lets Recall

So far, we have learnt how to tell the time when the minute hand is at 15, 30, 45, and 60 minutes. Let us revise.



The minute hand is at 6.

The hour hand is between 4 and 5.


The time is 4:30 or half past 4, i.e.

30 minutes have passed since 4:00.

TIME AND CALENDAR

Lets Recall

So far, we have learnt how to tell the time when the minute hand is at 15, 30, 45, and 60 minutes. Let us revise.



The minute hand is at 9.

The hour hand is close to 5.

The time is 4:45 or quarter to 5, i.e.


45 minutes have passes since 4:00

or 15 minutes are left till 5:00.

TIME AND CALENDAR

Lets Recall

So far, we have learnt how to tell the time when the minute hand is at 15, 30, 45, and 60 minutes. Let us revise.



The minute hand is at 12.


the hour hand is at 5.

The time is 5:00,

i.e. 60 minutes have passes since 4:00.

TIME AND CALENDAR

**What time
is it?**




12:00



TIME AND CALENDAR

What time
is it?




11 : 10



TIME AND CALENDAR

What time
is it?




7 : 50



TIME AND CALENDAR

**What time
is it?**




6 : 15

A close-up photograph of an analog clock face. The hour hand is between 6 and 7, and the minute hand is pointing at 3. The numbers 10, 11, 12, 1, 2, and 3 are visible.

TIME AND CALENDAR

What time
is it?



3 : 00



LEARNING OUTCOME:

Students are able to understand about the clock and recall about the time.

THANKING YOU
ODM EDUCATIONAL GROUP