

SESSION : 6
CLASS : IV
SUBJECT : MATHEMATICS
CHAPTER NUMBER : 12
CHAPTER NAME : MEASUREMENT
SUBTOPIC : ADDITION AND SUBTRACTION OF WEIGHT, EX-12 F & G

CHANGING YOUR TOMORROW

LEARNING OBJECTIVE

- Enable the students to understand how to add and subtract the weights.

MEASUREMENT

ADDITION OF WEIGHTS

EXAMPLE – 1 Add 128 kg 75 g and 244 kg 686 g.

kg	g
1	11
128	75
+ 244	686
372	761

Method

Step 1 :

Add the grams first.

$75 + 686 = 761$. write 761g under the grams' column.

Step 2 :

Add the kilograms.

$128 + 244 = 372$. write 372kg under kilograms' column.

Ans : 372kg 761g




MEASUREMENT

ADDITION OF WEIGHTS

Grams should be written as a 3-digit number.

e.g., 38g should be written as 038g and 9g as 009g etc.




ADDITION OF WEIGHT

EXERCISE – 12(F)

A. Add the following.

$$\begin{array}{r} \text{1} \quad \text{kg} \quad \text{g} \\ 1 \quad \quad \quad \\ 8 \quad \quad 1 \ 2 \ 4 \\ + \quad 7 \quad \quad 3 \ 2 \ 4 \\ \hline 1 \ 5 \quad \quad 4 \ 4 \ 8 \end{array}$$

Ans.  15 kg 448 g




ADDITION OF WEIGHT

EXERCISE – 12(F)

A. Add the following.

	kg	g
2	12	214
+	17	325
	29	539

Ans. **29 kg 539 g**



ADDITION OF WEIGHT

EXERCISE – 12(F)

B. Word problems.

1. A man bought 30kg 500g rice from one shop and 48kg 755g rice from another shop. How much rice did he buy altogether?


The man bought rice from one shop = 30kg 500g

The man also bought rice from another shop = 48kg 755g

he total bought =

	k g	g
	30	500
+	48	755
	79	255

Hence, 79kg 255g of rice he bought altogether.



MEASUREMENT

SUBTRACTION OF WEIGHTS

EXAMPLE – 1 Subtract 48 kg 85g from 95 kg 250 g.

Method

Step 1 :

Subtract the grams first.

$$250 - 85 = 165 \text{ g.}$$

Write 165 under grams' column.


Step 2 :

Subtract the kilograms.

$$95 - 48 = 47 \text{ kg. write 47 under kilograms' column.}$$

Ans : 47 kg 165 g.

kg	g
95	250
- 48	85
47kg	165g



SUBTRACTION OF WEIGHT


EXERCISE – 12(G)

A. Subtract the following.

1	kg	g
	8	11 7 13
	8 9	1 8 3
-	5 5	3 7 8
	3 3	8 0 5

Ans.

33kg 805g



SUBTRACTION OF WEIGHT


EXERCISE – 12(G)

A. Subtract the following.

	kg	g
	8 10	11 13 13
	9 1	2 4 3
-	4 8	4 6 7
	4 2	7 7 6

Ans.

42kg 776g



SUBTRACTION OF WEIGHT

EXERCISE – 12(G)

B. Word problems.


1. By how much 123kg 160g is less than 208 kg 048g?

one weight is = 208kg 048g

another weight is = 123kg 160g.

The difference between their weight =

	kg	g
	1 107	9 14
	2 0 8	0 4 8
-	1 2 3	1 6 0
	0 8 4	8 8 8



Therefore, The difference between their weight is
84kg 888g.

SUBTRACTION OF WEIGHT

EXERCISE – 12(G)

B. Word problems.

2. What should be added to 74kg 245g to get 86kg 418g?


One weight is = 86kg 418g

another weight is = 74kg 245g.

The difference between their weight =

kg	g
	3 11
8 6	4 1 8
- 7 4	2 4 5
	1 2 1 7 3

Thus, The difference between their weight is **12kg**
173g.



HOME ASSIGNMENT:

- **Complete Exercise – 12 F & G in your note book.**

LEARNING OUTCOME:

Students are able to understand how to add and subtract the weight.

THANKING YOU
ODM EDUCATIONAL GROUP