

SESSION :9

CLASS : I

SUBJECT : MATHEMATICS

CHAPTER NUMBER: 13

CHAPTER NAME : DATA HANDLING

SUBTOPIC : BOOK PAGE 119

CHANGING YOUR TOMORROW

Website: www.odmegroup.org

Email: info@odmps.org

Toll Free: **1800 120 2316**

Sishu Vihar, Infocity Road, Patia, Bhubaneswar- 751024

LEARNING OBJECTIVE :



Enable the learners
to collect, analyse and organize
different information.



CHAPTER- 13
DATA HANDLING

Watch the video

<https://youtu.be/MIOTp-yu0b0>

What is Data handling?

- Data means collection of any information.
- Data handling means to sort the collected information in an organized way.

OBSERVE THE PICTURE AND ANSWER THE FOLLOWING

EXAMPLE -1



Q1.How many kids are Playing?

Ans: 4 kids

Q2.How many are girls?

Ans: 2 girls.

Q3.How many animals you can see?

Ans: 2 animals.

Q4. Number of birds are
More than the dogs.

True / False

Ans: False


Example 2

OBSERVE AND FILL THE GIVEN DATA



Items	Number
	7
	4
	4
	6

Complete the Data



1) Complete the data table

4	6	5	2	4
				
strawberry	cherries	banana	pear	watermelon

Q1. Which fruit is most in number?

Ans: Cherries





Q2. Which fruit is least in number?

Ans: Pear

Name: _____

Study the picture graph. Use the information from the graph to answer the questions below.

Vegetables in Grandpa's Box

Onion	
Beetroot	
Squash	
Cabbage	

1. How many of each?

6

Onion

4

Squash

3

Beetroot

6

Cabbage

2. Are there more cabbages or onions?

Same

3. Which vegetable counts to 3?

Beetroot

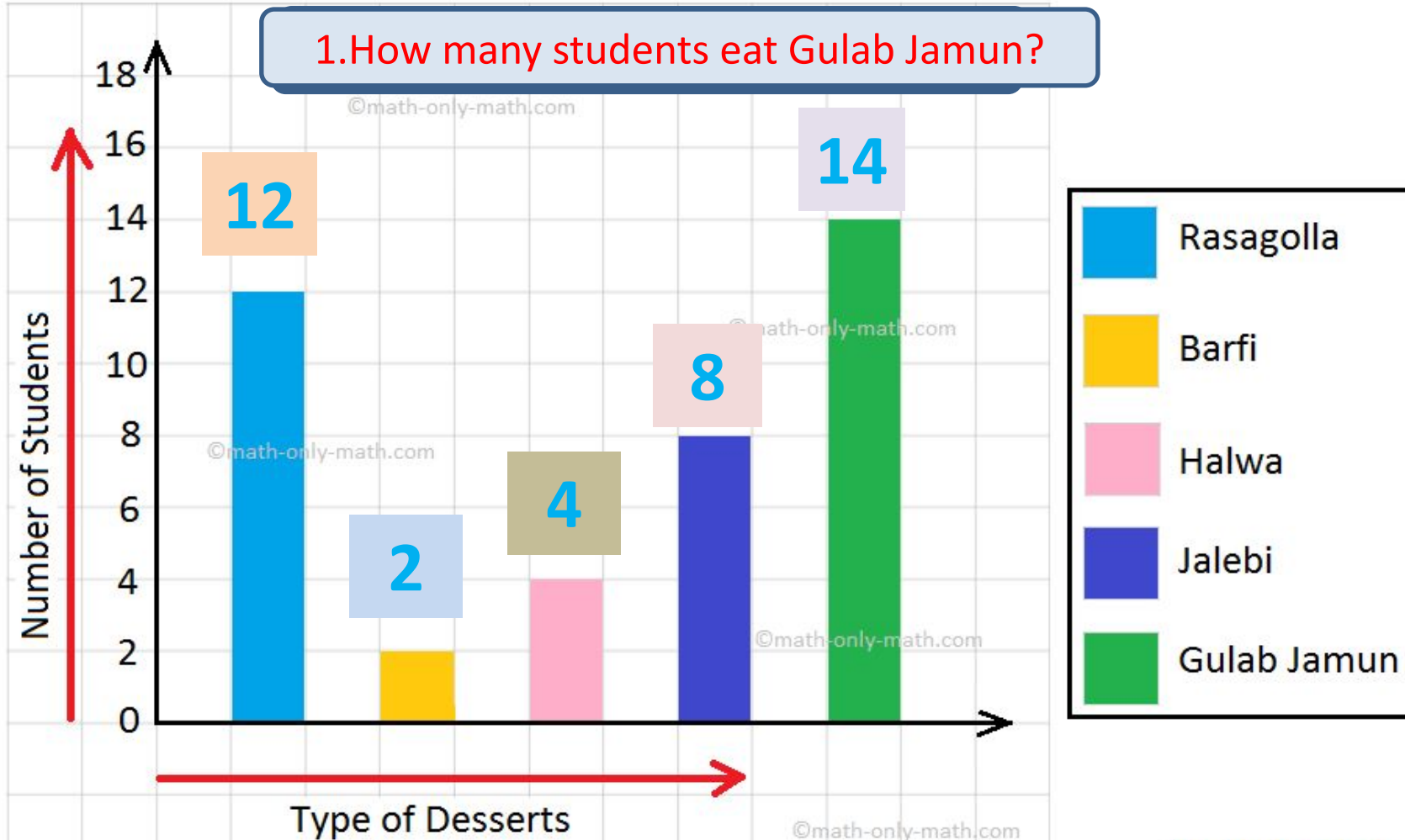
4. What is the total number of vegetables in the box?

$$6+3+4+6=19$$

ACTIVITY- 2 GRAPH

Give the correct information by observing the graph


1. How many students eat Gulab Jamun?



Which Dessert , students eat the most? **Gulab Jamun**

Exercise

1. See the picture carefully and fill the circles.




- (a) There are 5 apples.
- (b) There are 2 oranges.
- (c) There are 3 bananas.
- (d) There is 1 mango.

TODAY'S CLASS WORK (IN BOOK)


2. The following picture shows different kinds of animals. Write the number of each kind of animal in the circles.

- (a) There is **1** giraffe.
- (b) There are **2** elephants.
- (c) There are **2** rabbits.
- (d) There are **2** lions.
- (e) There are **3** lion cubs.



SUB	HOME ASSIGNMENT
Mathematics	Do book page 120 (In note book) NB: Only write the answer

LEARNING OUTCOME :



The learners are now able to collect ,organise and analyse some information by participating in some social activities.

THANKING YOU
ODM EDUCATIONAL GROUP