

SESSION :9
CLASS : I
SUBJECT : MATHEMATICS
CHAPTER NUMBER: 13
CHAPTER NAME : DATA HANDLING
SUBTOPIC : BOOK PAGE 119

CHANGING YOUR TOMORROW

Website: www.odmegroup.org
Email: info@odmps.org

Toll Free: **1800 120 2316**

Sishu Vihar, Infocity Road, Patia, Bhubaneswar- 751024

LEARNING OBJECTIVE :



Enable the learners
to collect, analyse and organize
different information.



Slide 2

- 1 @Format for content and slide heading is missing? Just like you have mentioned in DOC., We need to specify, for each slide's heading and text content, what will be the font style +amanrouniyar@odmegroup.org
Assigned to you
-Swoyan Satyendu
, 17-06-2020

CHAPTER- 13
DATA HANDLING

Watch the video

<https://youtu.be/MIOTp-yu0b0>

CHAPTER- 13
DATA HANDLING

What is Data handling?

- Data means collection of any information.
- Data handling means to sort the collected information in an organized way.

OBSERVE THE PICTURE AND ANSWER THE FOLLOWING

EXAMPLE -1



Q1.How many kids are Playing?

Ans: 4 kids

Q2.How many are girls?

Ans: 2 girls.

Q3.How many animals you can see?

Ans: 2 animals.





Q4. Number of birds are
More than the dogs.

True / False

Ans: False


Example 2 OBSERVE AND FILL THE GIVEN DATA



Items	Number
	7
	4
	4
	6

ACTIVITY- 1

Complete the Data



1) Complete the data table

4	6	5	2	4
				
strawberry	cherries	banana	pear	watermelon

Q1. Which fruit is most in number?

Ans: Cherries

Q2. Which fruit is least in number?

Ans: Pear


ACTIVITY- 2

Name: Gandpa's Veggies

PICTURE GRAPH

Study the picture graph. Use the information from the graph to answer the questions below.

Vegetables in Grandpa's Box



1. How many of each?

6

Onion

4

Squash

3

Beetroot

6

Cabbage

2. Are there more cabbages or onions?

Same

3. Which vegetable counts to 3?

Beetroot

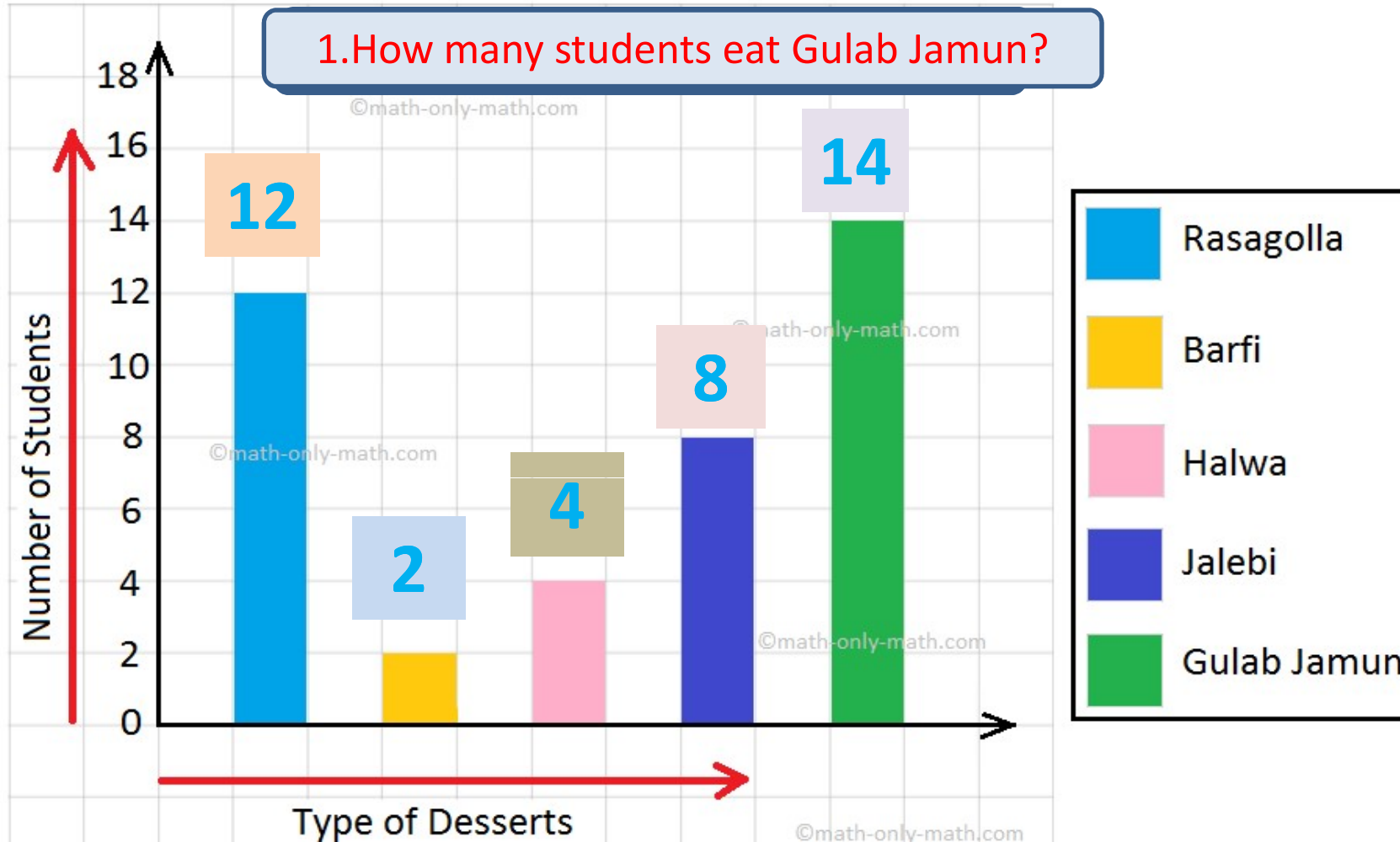
4. What is the total number of vegetables in the box?

$6+3+4+6=19$

ACTIVITY- 2 GRAPH

Give the correct information by observing the graph

1. How many students eat Gulab Jamun?




Which Dessert , students eat the most? **Gulab Jamun**

C.W
Date

TODAY'S CLASS WORK (IN BOOK)

Exercise

1. See the picture carefully and fill the circles.




- (a) There are **5** apples.
- (b) There are **2** oranges.
- (c) There are **3** bananas.
- (d) There is **1** mango.

TODAY'S CLASS WORK (IN BOOK)

2. The following picture shows different kinds of animals. Write the number of each kind of animal in the circles.

- (a) There is **1** giraffe.
- (b) There are **2** elephants.
- (c) There are **2** rabbits.
- (d) There are **2** lions.
- (e) There are **3** lion cubs.



SUB


HOME ASSIGNMENT

Mathematics

**Do book page 120
(In note book)**

NB: Only write the answer

LEARNING OUTCOME :



The learners are now able to collect ,organise and analyse some information by participating in some social activities.

Slide 13

- 2 @Format for content and slide heading is missing? Just like you have mentioned in DOC., We need to specify, for each slide's heading and text content, what will be the font style +amanrouniyar@odmegroup.org
Assigned to you
-Swoyan Satyendu
, 17-06-2020

THANKING YOU
ODM EDUCATIONAL GROUP