

Chapter- 1

Revision

STUDY NOTES

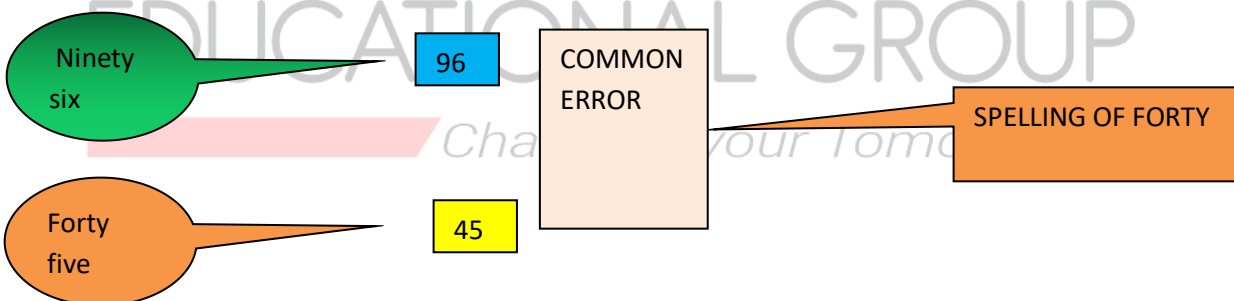
- Write in Figures, Write in Words, Write in Expanded form & Write in Compact form.
- Fill in the blanks, Circle the largest number & Cross the smallest number.
- Arrange in Ascending & Descending order.
- Miscellaneous Questions.

WRITE IN FIGURES:

EXPLANATION:

To write in figures means using the digits 0-9 to write the number and not use words.

EXAMPLE :



WRITE IN WORDS:

EXPLANATION:

Number in words are the alphabetical form of numbers. Or these are numbers written in words.

EXAMPLE :

78

SEVENTY EIGHT

59

FIFTY NINE

WRITE IN EXPANDED FORM:**EXPLANATION:**

Expanded form is a way of writing numbers to see the Math value of individual digits.

EXAMPLE**Write the given numbers in their expanded form:**

43 40+3

Expanded form is a way of writing numbers to see the Math value of individual digits.

59 50+9

67 60+7

WRITE IN COMPACT FORM:

Compact form or standard form is a way of writing down very large numbers or very small numbers easily.

EXAMPLE :**Write in compact form:****30 +9=39****70+4=74**

$80+8=88$

Expanded form is a way of writing numbers to see the Math value of individual digits.

FILL IN THE BLANKS:

EXAMPLE :

Fill in the blanks with appropriate numbers.

The number before 47 is _____.

The number after 24 is _____.

89 is in between _____ & 90.

CIRCLE THE LARGEST NUMBER AND CROSS THE SMALLEST NUMBER:

EXAMPLE :

Circle ○ the largest number and cross(×) the smallest number in each case.

34 48 59 82 27

67 71 25 89 45

93 64 46 71 17

ARRANGE IN ASCENDING ORDER:

EXPLANATION:

Ascending order means arranging the numbers from smallest to biggest.

EXAMPLE :

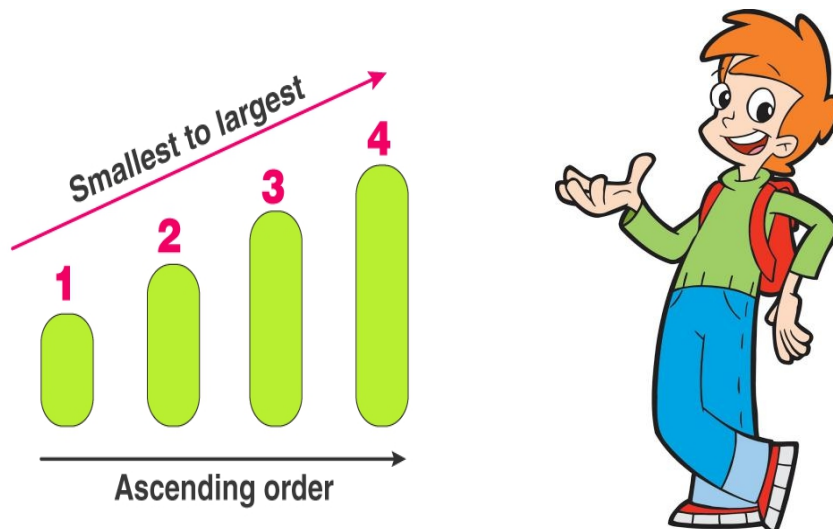
Arrange the following numbers in ascending order:

34 12 47 64 37 _____

76 49 84 96 35 _____

55 35 75 65 95 _____

ARRANGE IN ASCENDING ORDER:



ARRANGE IN DESCENDING ORDER:

EXPLANATION:

Descending order means arranging the numbers from biggest to smallest.

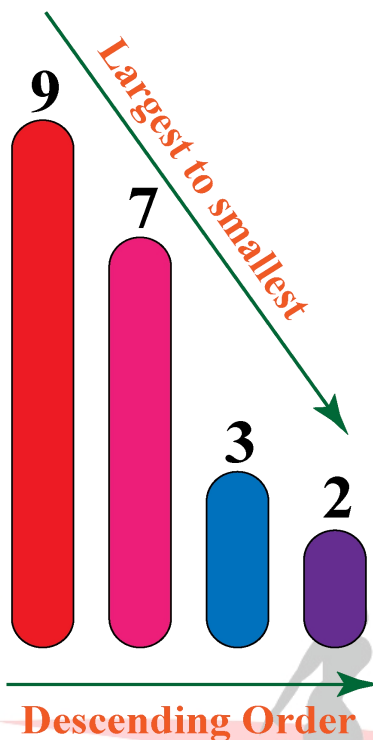
EXAMPLE :

Arrange the following numbers in descending order:

64 32 47 54 97 _____

86 99 46 76 89 _____

65 85 75 65 91 _____



MISCELLANEOUS QUESTIONS:

EXAMPLE :

1. 65 is greater than ____ but less than ____.

2. 54 is less than ____ but greater than ____.

3. Write in words :

97 _____

48 _____

4. Put the sign $<$, $>$ or $=$

35 ____ 23

74 ____ Eighty eight

71 ____ 71

19 ____ Forty nine

5. Fill in the blanks.

90 comes before _____.

86 comes between _____ and _____.

68 comes after _____.

_____ comes before 75.

_____ comes after 89.

