

SESSION : 18
CLASS : 3
SUBJECT : MATHEMATICS
CHAPTER NUMBER: 9
CHAPTER NAME : DATA HANDLING
SUBTOPIC : DOUBT CLEARING AND CLASS TEST

CHANGING YOUR TOMORROW

LEARNING OBJECTIVE :

To know how far the students have acquired the knowledge related to different topics from the chapter.

DATA HANDLING

DOUBT CLEARING AND CLASS TEST

VIDEO

M
A
T
H
S

DATA HANDLING

DOUBT CLEARING AND CLASS TEST

**Doubt clearing and class test
in test notebook.**








DATA HANDLING

DOUBT CLEARING AND CLASS TEST

1

PLANTATION DURING THIS WEEK

Mango trees	
Banana trees	
Rose trees	
Coconut trees	
Grapes trees	

SEE THE PICTOGRAPH AND ANSWER

1. Which tree was planted maximum in number ? _____
2. Which two trees are planted same in number? _____
3. Which tree was planted least in number? _____
4. How many trees were planted altogether? _____

DATA HANDLING

DOUBT CLEARING AND CLASS TEST

2

A bakery records the sale of bakery items in his shop as follows:



M
H
T
H
S

DATA HANDLING

DOUBT CLEARING AND CLASS TEST

Represent the information in a tabular form using tally marks and answer the following questions.

6

Items	Tally marks	Number of items
DONUTS		
MUFFINS		
COOKIES		
CREAM ROLLS		
CUPCAKES		
BUNS		

M
A
T
H
S

DATA HANDLING

DOUBT CLEARING AND CLASS TEST

Now answer the questions:

- 1) Which item is sold maximum in number? _____
- 2) How many muffins were sold? _____
- 3) Compare cream rolls and buns. _____
- 4) How many donuts were sold? _____
- 5) How many total items were sold? _____
- 6) Which two items are sold same in number?

DATA HANDLING

DOUBT CLEARING AND CLASS TEST

ANSWERS

M
A
T
H
S

1

SEE THE PICTOGRAPH AND ANSWER

4

1. Which tree was planted maximum in number ? GRAPES

2. Which two trees are planted same in number?

MANGO AND COCONUT

3. Which tree was planted least in number? ROSE

4. How many trees were planted altogether? 29

DATA HANDLING

DOUBT CLEARING AND CLASS TEST

2

Represent the information in a tabular form using tally marks and answer the following questions.

6

Items	Number of items	Tally marks
DONUTS	6	 I
MUFFINS	9	 IIII
COOKIES	5	
CREAM ROLLS	8	 III
CUPCAKES	12	 II
BUNS	5	

M
A
T
H
S

DATA HANDLING


DOUBT CLEARING AND CLASS TEST

Now answer the questions:

- 1) Which item is sold maximum in number? Cupcakes
- 2) How many muffins were sold? 9
- 3) Compare cream rolls and buns. 8 and 5
- 4) How many donuts were sold? 6
- 5) How many total items were sold? 45
- 6) Which two items are sold same in number?
cookies and buns

DATA HANDLING

DOUBT CLEARING AND CLASS TEST



LEARNING OUTCOME:

We are able to know the understanding ability of the students.

THANKING YOU
ODM EDUCATIONAL GROUP