

**SESSION : 6**  
**CLASS : 3**  
**SUBJECT : MATHEMATICS**  
**CHAPTER NUMBER: 3**  
**CHAPTER NAME : ADDITION**  
**SUBTOPIC : DOUBT CLEARING AND CLASS TEST (CHAPTER 1 & 2)**

---

**CHANGING YOUR TOMORROW**

---

## **LEARNING OBJECTIVE :**

**To know how far the students have acquired the knowledge related to different topics from the chapter.**

# REVISION AND NUMBERS

## DOUBT CLEARING AND CLASS TEST (CHAPTER 1 & 2)



# **REVISION AND NUMBERS**

## **DOUBT CLEARING AND CLASS TEST (CHAPTER 1 & 2)**

**I. Do as directed:**

**i) Write the following numbers in words-**

**a) 1048-**

**b) 69165-**

**ii) Write the following numbers in figures-**

**a) Eighty six thousand three hundred four -**

**b) Nine thousand one hundred forty nine -**

# REVISION AND NUMBERS

## DOUBT CLEARING AND CLASS TEST (CHAPTER 1 & 2)

iii) Write the Successor or Predecessor of the following numbers-

a) 9 5 8 9 \_\_\_\_\_

b) \_\_\_\_\_ 8 0 0 1

iv) Write the following numbers in short form-

a)  $70000 + 2000 + 500 + 90 + 1 =$  \_\_\_\_\_

b)  $4000 + 50 + 7 =$  \_\_\_\_\_

# REVISION AND NUMBERS

## DOUBT CLEARING AND CLASS TEST (CHAPTER 1 & 2)

II. Compute:

a) Write the numbers given below in expanded notation-

4 0 7 3 6 = \_\_\_\_\_ ten thousands \_\_\_\_\_ thousand \_\_\_\_\_ hundreds  
\_\_\_\_\_ tens \_\_\_\_\_ ones

b) Write the following numbers in expanded form-

2 0 5 7 = \_\_\_\_\_ + \_\_\_\_\_ + \_\_\_\_\_ + \_\_\_\_\_

## REVISION AND NUMBERS

### DOUBT CLEARING AND CLASS TEST (CHAPTER 1 & 2)

c) Write the following in ascending order-

5201 , 5219 , 5210 , 5216 , 5206 \_\_\_\_\_

d) Write the following in descending order-

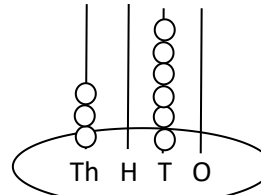
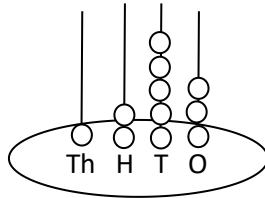
8100 , 8400 , 8700 , 8300 , 8900 \_\_\_\_\_

# REVISION AND NUMBERS

## DOUBT CLEARING AND CLASS TEST (CHAPTER 1 & 2)

III.Fill up:

a) Write the numbers shown in the abacus-





# REVISION AND NUMBERS

## DOUBT CLEARING AND CLASS TEST (CHAPTER 1 & 2)

b) Write the place value of the digit in red-

**2** 5 6 4

Place Value \_\_\_\_\_

**3** 2 7 0 6

Place Value \_\_\_\_\_

c) Form the greatest and smallest 4-digit numbers by using the given digits-

**GREATEST**

**SMALLEST**

4 , 8 , 5 , 0

\_\_\_\_\_

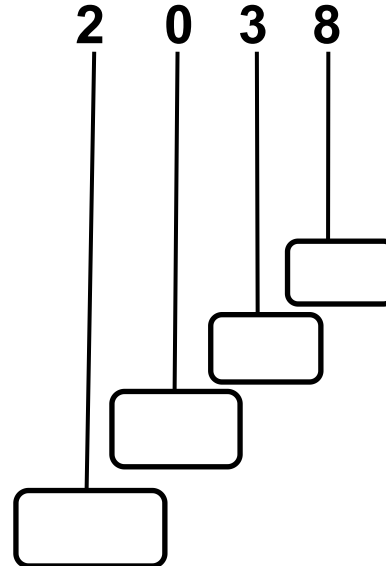
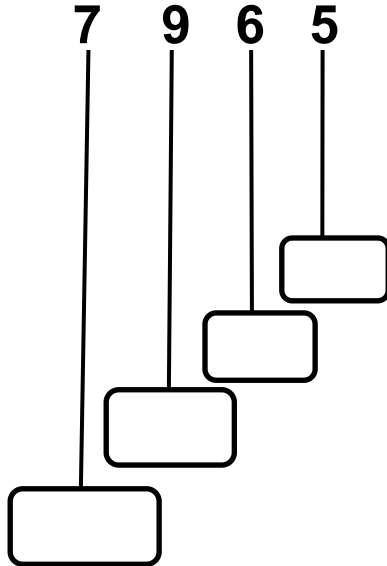
\_\_\_\_\_

# REVISION AND NUMBERS

## DOUBT CLEARING AND CLASS TEST (CHAPTER 1 & 2)

IV. Find out:

Find the place value of each digit-



# REVISION AND NUMBERS

## DOUBT CLEARING AND CLASS TEST (CHAPTER 1 & 2)

### I. Do as directed:

i) Write the following numbers in words-

a) 1048- One thousand forty eight

b) 69165- Sixty nine thousand one hundred sixty five

ii) Write the following numbers in figures-

a) Eighty six thousand three hundred four - 86304

b) Nine thousand one hundred forty nine - 9149

## REVISION AND NUMBERS

### DOUBT CLEARING AND CLASS TEST (CHAPTER 1 & 2)

iii) Write the Successor or Predecessor of the following numbers-

a) 9 5 8 9 9 5 9 0

b) 8 0 0 0 8 0 0 1

iv) Write the following numbers in short form-

a)  $7\,0000 + 2\,000 + 500 + 90 + 1 = \underline{72591}$

b)  $4\,000 + 50 + 7 = \underline{4057}$

# REVISION AND NUMBERS

## DOUBT CLEARING AND CLASS TEST (CHAPTER 1 & 2)

II. Compute:

a) Write the numbers given below in expanded notation-

4 0 7 3 6 = 4 ten thousands 0 thousand 7 hundreds  
3 tens 6 ones

b) Write the following numbers in expanded form-

2 0 5 7 = 2 0 0 0 + 0 + 5 0 + 7

## REVISION AND NUMBERS

### DOUBT CLEARING AND CLASS TEST (CHAPTER 1 & 2)

c) Write the following in ascending order-

5201 , 5219 , 5210 , 5216 , 5206    5201 , 5206 , 5210 , 5216 , 5219

d) Write the following in descending order-

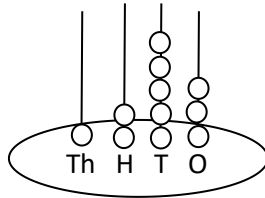
8100 , 8400 , 8700 , 8300 , 8900    8900 , 8700 , 8400 , 8300 , 8100

# REVISION AND NUMBERS

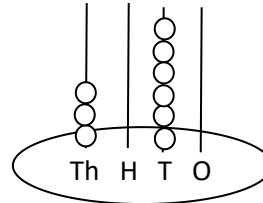
## DOUBT CLEARING AND CLASS TEST (CHAPTER 1 & 2)

III.Fill up:

a) Write the numbers shown in the abacus-



1 2 5 3



3 0 6 0

## REVISION AND NUMBERS

### DOUBT CLEARING AND CLASS TEST (CHAPTER 1 & 2)

b) Write the place value of the digit in red-

**2** 5 6 4

Place Value 2000

**3** 2 7 0 6

Place Value 30000

c) Form the greatest and smallest 4-digit numbers by using the given digits-

**GREATEST**

4 , 8 , 5 , 0

8 5 4 0

**SMALLEST**

4 0 5 8

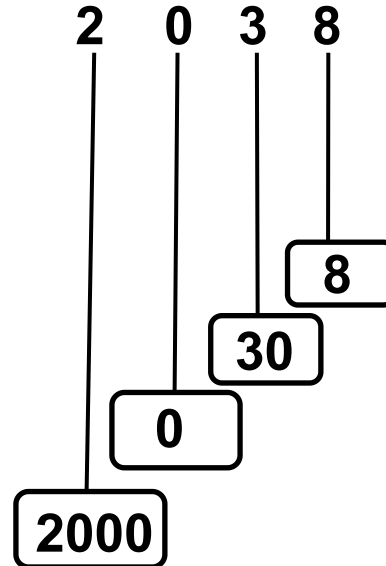
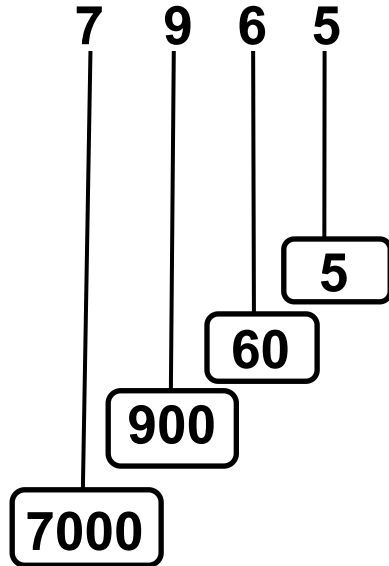


# REVISION AND NUMBERS

## DOUBT CLEARING AND CLASS TEST (CHAPTER 1 & 2)

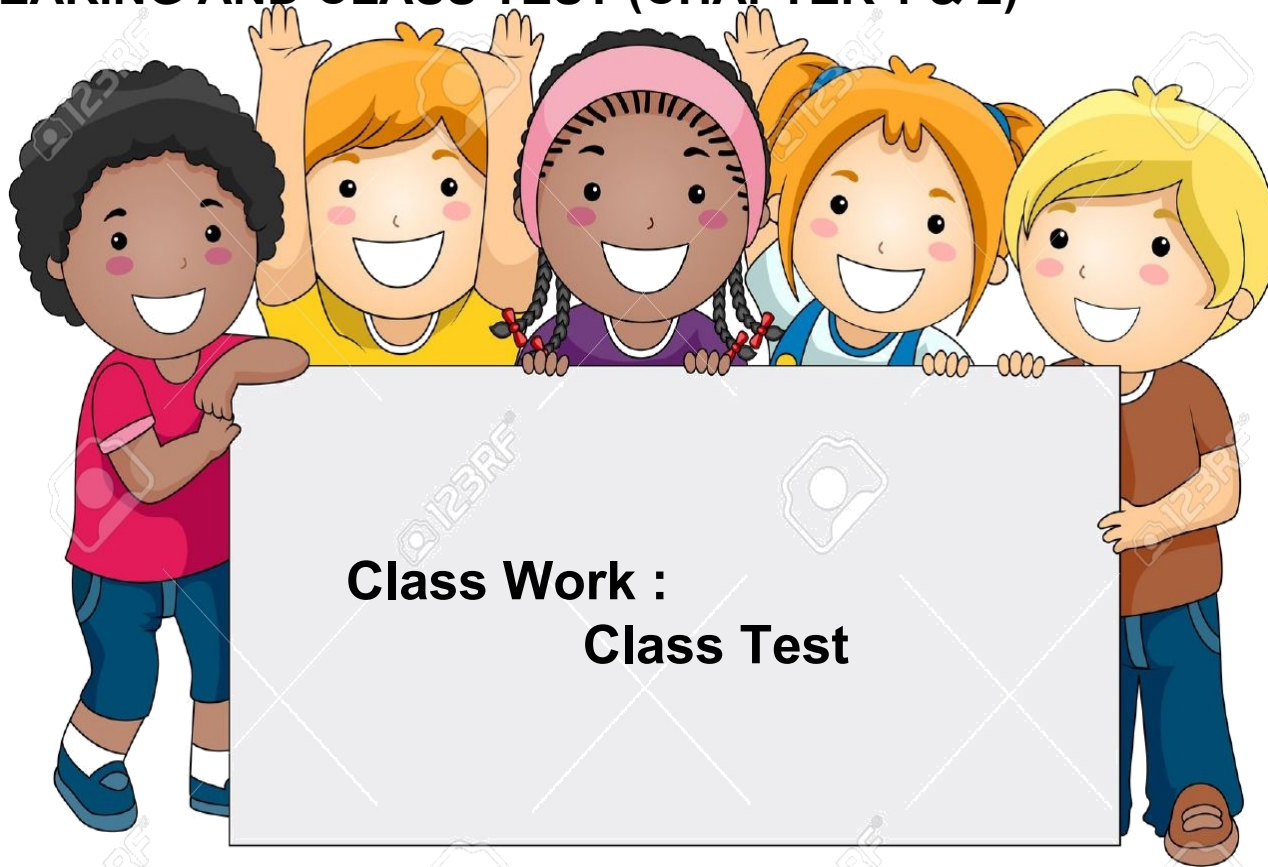
### IV. Find out:

Find the place value of each digit-



# REVISION AND NUMBERS

## DOUBT CLEARING AND CLASS TEST (CHAPTER 1 & 2)



**Class Work :**  
**Class Test**

## LEARNING OUTCOME:

**We are able to know the understanding ability of the students.**



**THANKING YOU**  
**ODM EDUCATIONAL**  
**GROUP**