

Chapter- 8

Man: The Living Machine

WORKSHEET**A. NAME THE SYSTEM RESPONSIBLE FOR.**

1. Circulation of blood _____ .
2. Breathing _____ .
3. Giving shape to the body _____ .
4. Breaking food for absorption _____ .
5. Receiving messages from nerves _____ .

B. TICK THE CORRECT ANSWER.

1. The skin, eyes and lungs are examples of _____ .
a) organ system b) organs c) cells
2. The _____ pull the bones to make them move.
a) muscles b) lungs c) kidneys
3. Digestion begins in the _____ .
a) mouth b) stomach c) small intestine
4. Which of these organs controls all the systems in the body?
a) heart b) kidney c) brain
5. The _____ pumps blood to different parts of the body.
a) liver b) heart c) both a & b

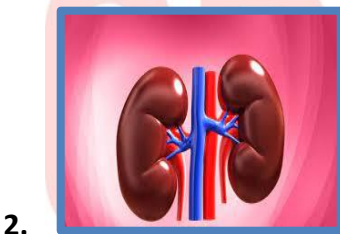
C. FILL IN THE BLANKS.

1. The food that cannot be digested goes to the _____ .
2. The _____ pump blood to all parts of the body.
3. The kidneys remove _____ .
4. The nervous system consists of the _____, the spinal cord and the nerves.
5. The respiratory system supplies _____ to various parts of our body

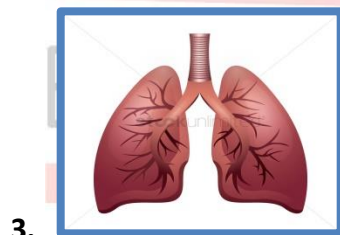
D. MATCH THE ORGAN TO THE SYSTEM IT BELONGS.



Digestive System



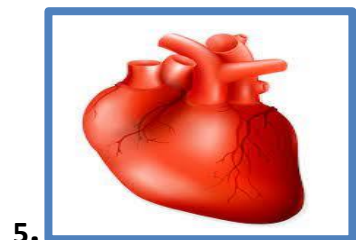
Nervous System



Excretory System



Circulatory System



Respiratory System

