

**SESSION : 10**

**CLASS : I**

**SUBJECT : MATHEMATICS**

**CHAPTER NUMBER:2**

**CHAPTER NAME :REVISION OF NUMBERS**

**SUB TOPIC :QUIZ AND DOUBT CLEARING**

**CHANGING YOUR TOMORROW**

## **LEARNING OBJECTIVE :**

- **IT ENCOURAGES THE STUDENTS TO LOOK BEYOND THEIR TEXTUAL KNOWLEDGE.**
- **IT BUILDS TEAM SPIRIT.**
- **IT IS A FUN PARTICIPATION WITH COMPETITION.**
- **IT ENHANCES THE HIGHER ORDER THINKING SKILL OF THE STUDENTS.**
- **IT HELPS TO DEVELOP THE LANGUAGE ALSO**

# QUIZ

In real class rooms we  
divide the class into  
3 to 4 groups  
but as we are conducting  
online quiz It is  
convenient to  
divide the class only in  
two groups viz: boys and girls teams.

# GROUPS

**BOYS**



**GIRLS**



# ROUNDS

**1<sup>st</sup> ROUND - QUESTIONNAIRE**

**2<sup>nd</sup> ROUND - VISUAL**

**3<sup>rd</sup> ROUND - RAPID FIRE**

# ROUND – 1

## QUESTIONNAIRE

# Rule:

1. In this round the quiz master gives 5 questions.
2. Children have to listen carefully and answer in the chat box at a go.
3. Quiz master will announce first 5 names and decide the winner group.

# QUESTIONS

Q1. There are 5 birds on a tree. All 5 fly away. How many left?

Q2. What numbers are missing ? **54,55,\_\_\_\_,57,\_\_\_\_,59**

Q3. What comes just before 78 on a number line?

Q4. What is the number name for 45 ?

Q5. How can we write thirty six in figures ?



**SUBMIT YOUR ANSWERS**

# ANSWERS

Q1. There are 5 birds on a tree. All 5 fly away. How many left? **0**

Q2. What numbers are missing ? **54, 55, 56, 57, 58, 59**

Q3. What comes just before 78 on a number line? **77**

Q4. What is the number name for 45 ? **Forty five**

Q5. How can we write thirty six in figures ? **36**

# WINNER GROUP IN ROUND 1

# 2<sup>nd</sup> ROUND

## VISUAL ROUND

### RULES-

1. Teacher will show 4 pictures in this round and children have to observe the pictures and write the answers.
2. They have to submit the answers at a time.

# How many lions?



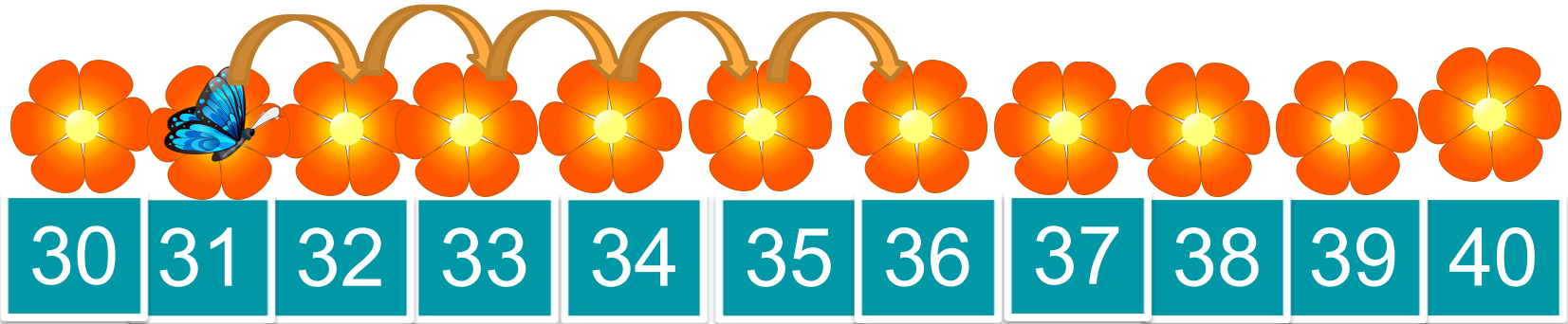
# Who is after the rabbit?



# Which fruit is big?



How many steps the butterfly is taking ? Where will she reach?





**SUBMIT YOUR ANSWER**

# How many lions?

8



Who is after the rabbit ?

deer

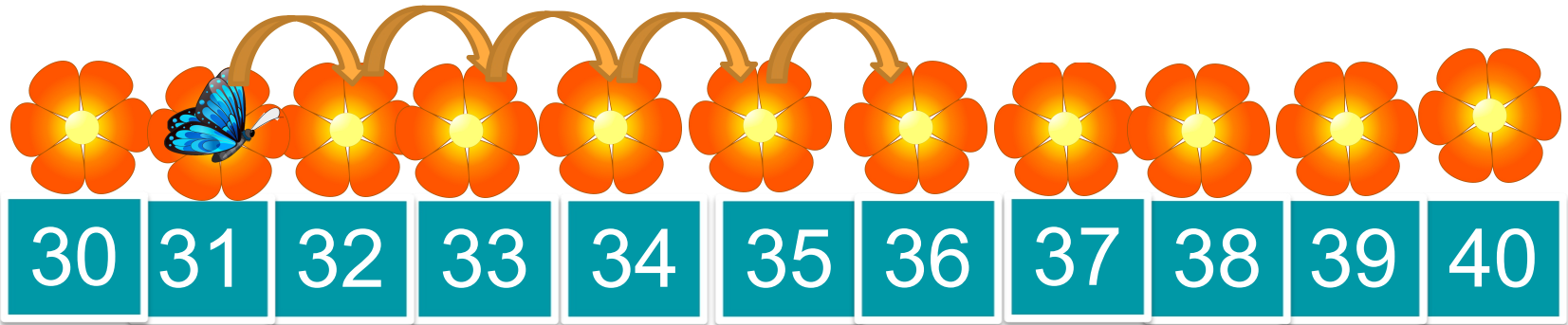


# Which fruit is big? Watermelon



How many steps the butterfly is taking ? Where will she reach?

**She has taken 4 steps she will reach at 36**



**WINNER GROUP IN ROUND 2**


# 3<sup>rd</sup> ROUND

## RAPID FIRE

### RULES -

1. Teacher will show 4 questions.
2. Children have to write the answers quickly and submit them together.

# Count the number of fish and write in figures






What comes after ?



# How many bees? Write in words



How many ladoos? How many left?



**SUBMIT YOUR ANSWER**

# Answers

1-16

2- 93,95

3- Fifteen

4- 0

# FINAL WINNER GROUP





## LEARNING OUTCOME:

- 1.They are now more confident and logistic..
- 2.Kids are able to prepare for the next stage in their education and apply their knowledge in the learning process.



**THANKING YOU**  
**ODM EDUCATIONAL GROUP**