

SESSION : 2

CLASS : I

SUBJECT : MATHEMATICS

CHAPTER NUMBER:4

CHAPTER NAME :COMPARISION OF NUMBERS

SUBTOPIC : 4.3 BEFORE,AFTER AND BETWEEN

CHANGING YOUR TOMORROW

LEARNING OBJECTIVE :

Enable the learners to identify the numbers which come before, after and between other numbers.

TODAY'S CONCEPT

**BEFORE,
AFTER AND BETWEEN**

POINTS TO REMEMBER

When we count backward from a given number. We get the numbers before.

The number, that comes before are always smaller than the given number.


When we count forward from a given number. We get the numbers after.

The number, that comes after are always greater than the given number.

Activity 1


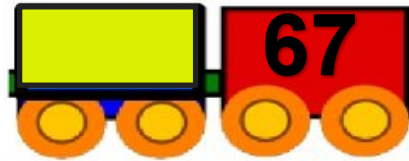
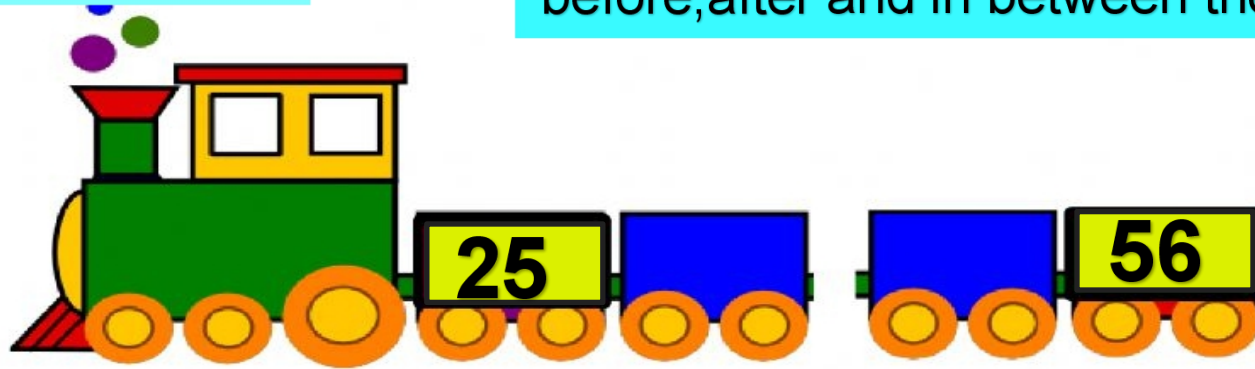
Today Chhota Bheem and his friends decided to have a race

Who is between Kalia and Bholu?



Activity 2

Drag and place the number that comes before, after and in between the given numbers



Cw Do in Maths note book

3. What comes after ?

(a) 15 **16**

(b) 67 **68**

(c) 13 **14**

(d) 96 **97**

(e) 58 **59**

(f) 81 **82**

4. What comes in between ?

(a) 56 **57** 58

(b) 21 **22** 23

(c) 44 **45** 46

(d) 63 **64** 65

(e) 74 **75** 76

(f) 12 **13** 14

Cw Do in Maths note book

5. Write the number that comes before, after or in between.

(a) **26** 27

(b) 9 **10**

(c) 49 **50** 51

(d) **77** 78

(e) 69 **70**

(f) 54 **55** 56

Date:-

SUB	HOME ASSIGNMENT
Mathematics	Practice book page 25

LEARNING OUTCOME :

The learner is now able to know about the concept of before, after and between numbers more confidently.

THANKING YOU
ODM EDUCATIONAL GROUP