

Chapter-8

Geometry

WORKSHEET

1. Choose the correct answer and fill in the blanks.

a. A triangle has _____ vertices.

- i. 3 ii. 4 iii. 5

b. The _____ has 4 equal sides.

- i. cuboid ii. cube iii. square

c. A _____ has 6 sides.

- i. triangle ii. rectangle iii. hexagon

2. Write TRUE for correct answer and FALSE for wrong answer.

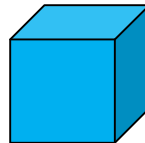

i. A rectangle has 2 equal diagonals. ()

ii. A sphere has 2 flat faces. ()

iii. We draw straight lines by using a ruler. ()

3. Do as directed.

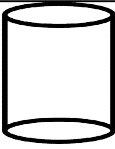

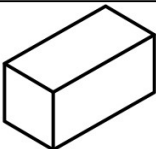


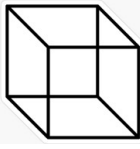
i. Name the shapes



ii. Identify the shapes of given objects.



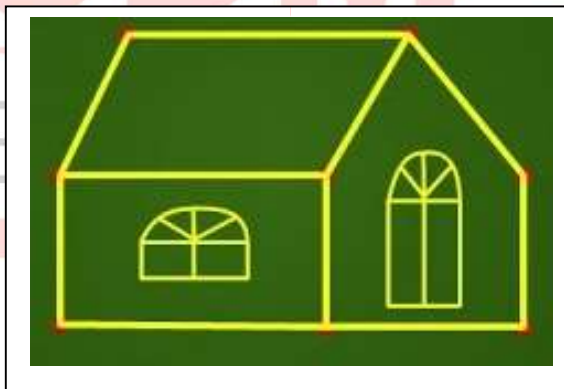
iii. Circle the object having:

1 vertex			
Only flat faces			


iv. Write straight line or curved line.

	<input type="text"/>		<input type="text"/>
---	----------------------	---	----------------------

4. Count and write the correct numbers.



Slanting lines	_____
Horizontal lines	_____
Vertical lines	_____



Triangles	_____
Rectangles	_____
Circles	_____

X X X