

Chapter- 18

Patterns

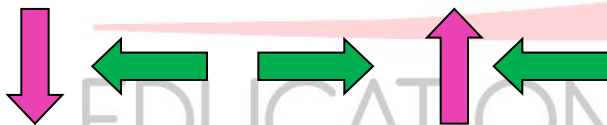
WORKSHEET

1. FILL IN THE BLANKS:

- The arrangement in which colours, designs, shapes or numbers are arranged according to a rule is called _____.
- Pattern consisting of colours, designs or shapes is called a _____.
- The pattern which can go on and on without coming to an end is called _____.
- The pattern consisting of numbers is called a _____.
- The next 2 patterns of 100, 80, 60, is _____ and _____.

2. SOLVE THE FOLLOWING

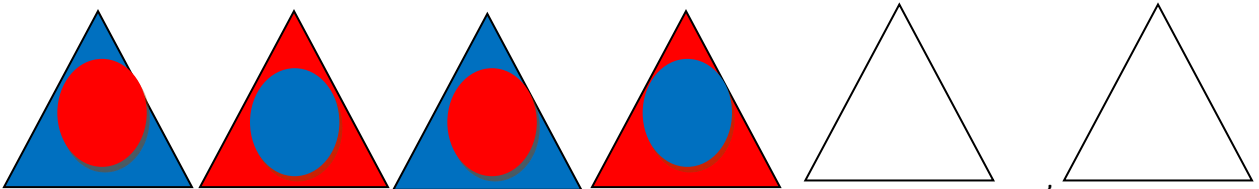
- a. Draw the next two geometrical figures:



- b. Draw the next two geometrical figures:



- c. Draw the next two geometrical figures:




- d. Draw the next two geometrical figures:



- e. Write the next 2 numbers: 2, 5, 11, 23 _____, _____
- f. Write the next 2 numbers: 10, 21, 43, 87, _____, _____
- g. Write the next 2 numbers: 200, 180, 160, 140, _____, _____
- h. Write the next 2 numbers: 20, 40, 60, 80, _____, _____
- i. Write the next 2 patterns: AB BC CD DE _____, _____
- j. Write the next 2 patterns: AC BD EG FH IK _____, _____

k.  _____, _____

l.  _____, _____

m.  _____, _____

n.  _____, _____

- o. 11, 33, 55, 77, _____, _____

ODM
EDUCATIONAL GROUP
Changing your Tomorrow
