

Chapter-13

Time

WORKSHEET

1. Fill in the blanks.

- a. Thursday comes after _____.
- b. July comes before _____.
- c. Republic Day is celebrated on _____th of January .
- d. The longer hand is the _____ hand.
- e. The time from _____ to _____ is known as a.m.


2. Do as directed.

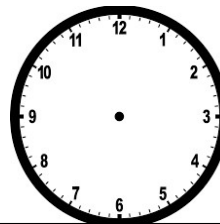
a. Write the time shown by each clock.





b. Draw the hands according to the given time.

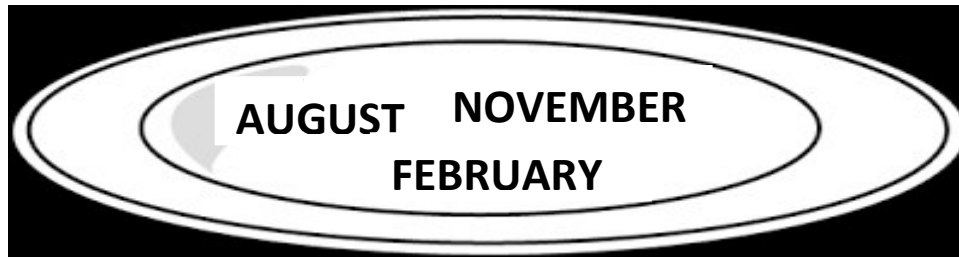




c. Which days are known as weekend?

Write the names in the given box.

d. Write the given months in the correct tray.



Having 31 days

Having 30 days

e. Write the missing days.

MONDAY, _____, WEDNESDAY, _____, FRIDAY.

3. Match the followings.

A

Saturday

Hour hand

Half past 3

Leap year

12 months

B

3:30

366 days

1 year

6th day of the week

Shorter hand.

_____ XXXX _____