

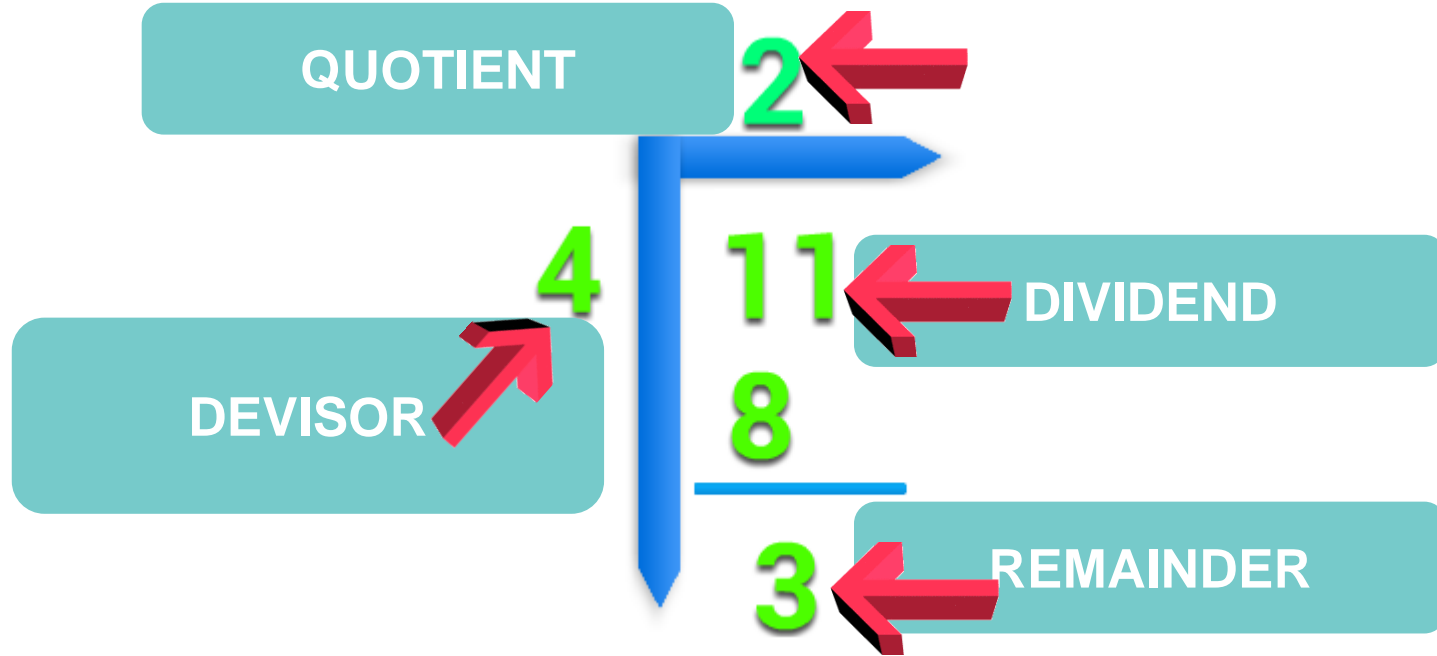
SESSION : 19
CLASS : I
SUBJECT : MATHEMATICS
CHAPTER NUMBER: 10
CHAPTER NAME : DIVISION
SUBTOPIC : WORD PROBLEMS

CHANGING YOUR TOMORROW

TODAY'S TOPIC

WORD PROBLEMS

NEW WORDS RELATED TO DIVISION



Divide 18 by 3

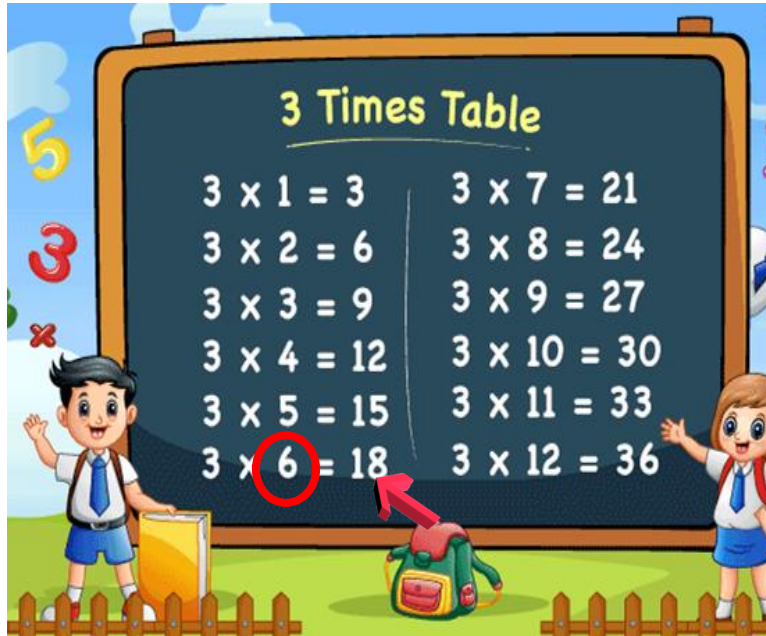
$$18 \div 3 = \underline{6}$$

Step 1: Recall multiplication table 3.

Step 2: Go on recalling till you get 18.

Step 3: Stop when you reach 18.

Step 4: Pick the number and write.



Divide and drag the correct answer .

Divide.

$$30 \div 5 = ?$$

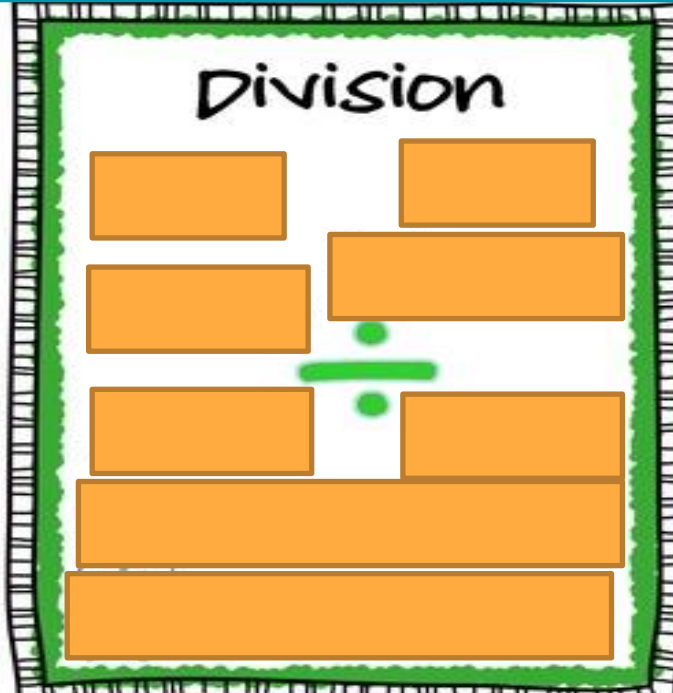
8 6 7 3

5 Times Table

$5 \times 1 = 5$	$5 \times 7 = 37$
$5 \times 2 = 10$	$5 \times 8 = 40$
$5 \times 3 = 15$	$5 \times 9 = 45$
$5 \times 4 = 20$	$5 \times 10 = 50$
$5 \times 5 = 25$	$5 \times 11 = 55$
$5 \times 6 = 30$	$5 \times 12 = 60$

TODAY'S TOPIC WORD PROBLEMS

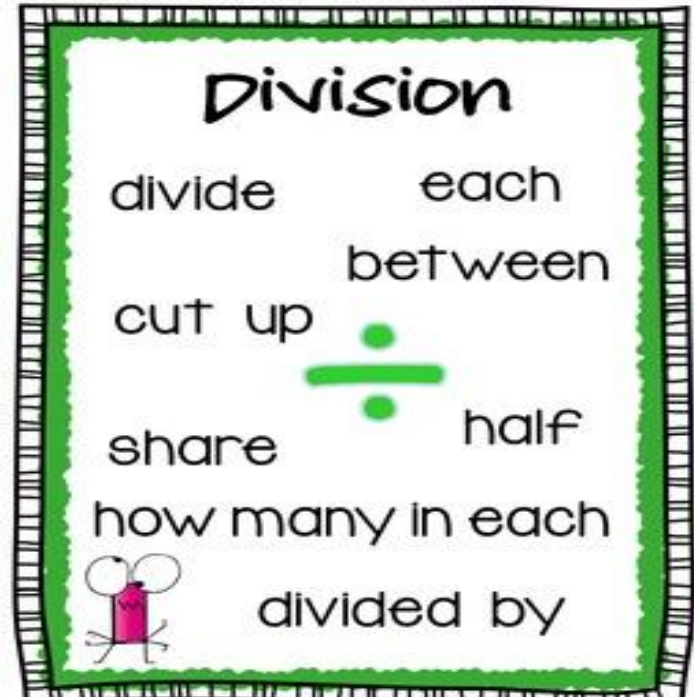
KEY WORDS FOR DIVISION



STEPS TO SOLVE A WORD PROBLEMS

Steps to solve word problems

1. Read the story
2. Understand
3. Collect the information
4. Find out the key words
5. Solve and write the answer



LET'S SOLVE WORD PROBLEMS

Example 1:

Raj has 25 marbles. He distributes among 5 friends.
How many marbles does **each** friend get?

Number of marbles 25

Number of friends 5

Number of marbles each friend gets

$$25 \div 5 = 5$$

Now recall multiplication table 5

$$5 \times 1 = 5$$

$$5 \times 2 = 10$$

$$5 \times 3 = 15$$

$$5 \times 4 = 20$$

$$5 \times 5 = 25$$

So, each friend gets 5 marbles

LET'S SOLVE WORD PROBLEMS

Example 2:

Neha puts 32 pencils in 4 boxes equally.
How many pencils are there in **each** box?

Number of pencils 32

Number of boxes 4

Number of pencils in each box

$$32 \div 4 = 8$$

So, there are 8 pencils in each box

Now recall multiplication table 4

$$4 \times 1 = 4$$

$$4 \times 2 = 8$$

$$4 \times 3 = 12$$

$$4 \times 4 = 16$$

$$4 \times 5 = 20$$

$$4 \times 6 = 24$$

$$4 \times 7 = 28$$

$$4 \times 8 = 32$$

C.W
date

Today's class work in note book

Word Problems

1. There are 16 stamps to be put in 4 envelopes equally.
How many stamps will each envelope have ?

4

Number of stamps 16

Number of envelopes 4

Number of stamps in each envelop

$$16 \div 4 = 4$$

Now recall multiplication table 4

$$4 \times 1 = 4$$

$$4 \times 2 = 8$$

$$4 \times 3 = 12$$

$$4 \times 4 = 16$$

So, there are 4 stamps in each envelope.

2. Amit has 30 chocolates. If 1 box can carry 15 chocolates, how many boxes does Amit need to put all of the chocolates ?

2

Number of chocolates 30

Number of chocolates he puts in one box 15

Number of boxes he needs for 30 chocolates

Now recall multiplication table 15

$$15 \times 1 = 15$$

$$15 \times 2 = 30$$

$$30 \div 15 = 2$$

So, he needs 2 boxes to put 30 chocolates.

3. 5 children share 20 lollipops equally. How many lollipops does each child get ?

4

Now recall multiplication table 5

$$5 \times 1 = 5$$

$$5 \times 2 = 10$$

$$5 \times 3 = 15$$

$$5 \times 4 = 20$$

Number of lollipops 20

Number of children 5

Number of lollipops each child gets

$$20 \div 5 = 4$$

So, each child gets 4 lollipops.

4. 3 monkeys share 27 bananas equally. How many bananas does each monkey get ?

9

Number of bananas 27

Number of monkeys 3

Number of bananas each monkey gets

$$27 \div 3 = 9$$

Now recall multiplication table 3

$$3 \times 1 = 3$$

$$3 \times 2 = 6$$

$$3 \times 3 = 9$$

$$3 \times 4 = 12$$

$$3 \times 5 = 15$$

$$3 \times 6 = 18$$

$$3 \times 7 = 21$$

$$3 \times 8 = 24$$

$$3 \times 9 = 27$$

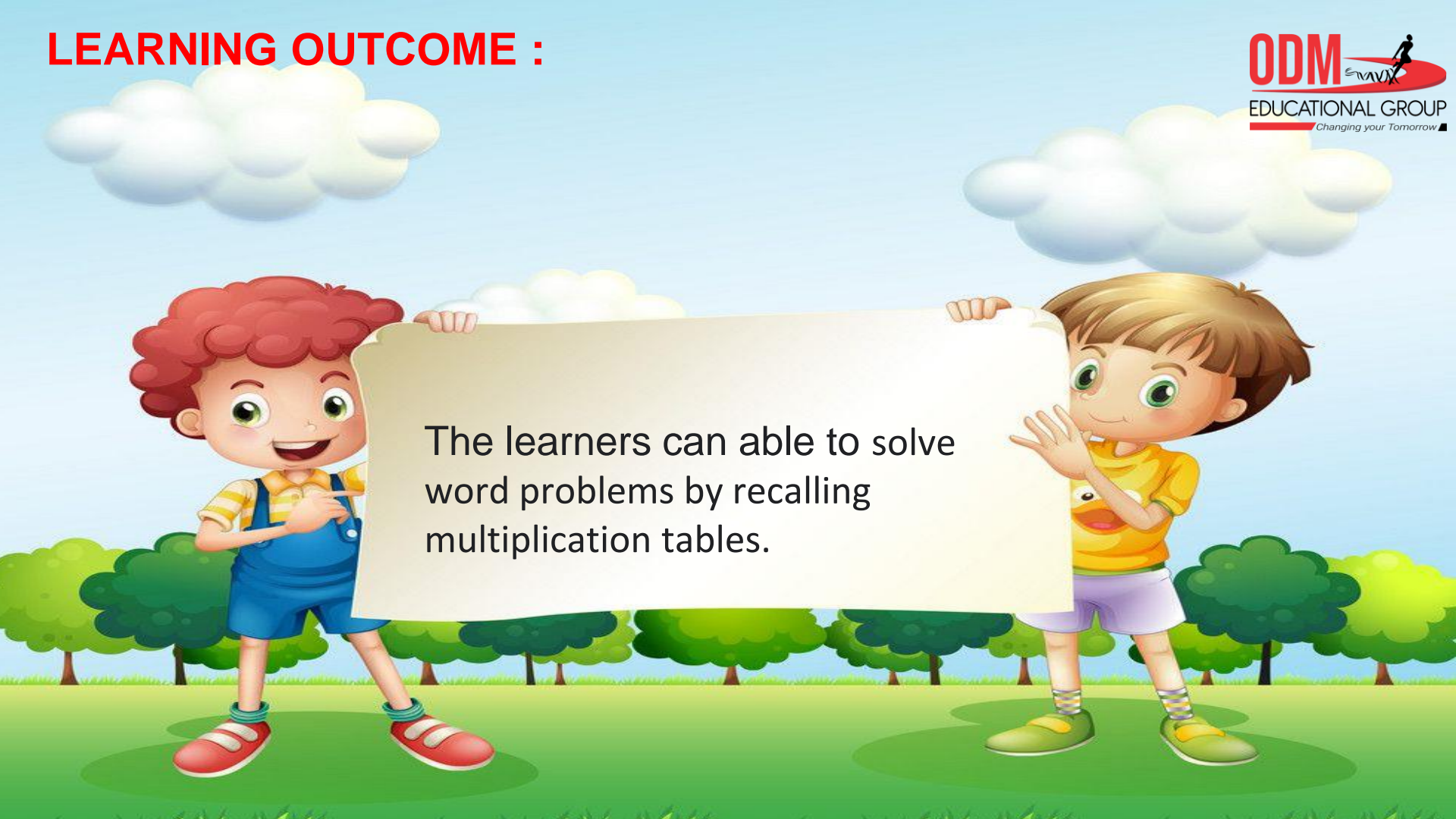
So, each monkey gets 9 bananas.

SUB

HOME ASSIGNMENT

Mathematics

LEARNING OUTCOME :



The learners can able to solve word problems by recalling multiplication tables.

THANKING YOU
ODM EDUCATIONAL GROUP