

SESSION :6

CLASS : I

SUBJECT : MATHEMATICS

CHAPTER NUMBER: 12,13,AND 15

CHAPTER NAME : GEOMETRY,DATA HANDLING AND MONEY

SUBTOPIC : REVISION TEST 2

CHANGING YOUR TOMORROW

Website: www.odmegroup.org

Email: info@odmps.org

Toll Free: **1800 120 2316**

Sishu Vihar, Infocity Road, Patia, Bhubaneswar- 751024

LEARNING OBJECTIVE :

- ❖ Enable the learners to practice for Annual Assessment.



REVISION TEST - 2

Q1) Fill in the blanks.

[1x5=5]

a) A **rectangle** _____ has two opposite sides equal.

b) Two 50 paise coins make ₹ **1** _____.

c) A **sphere** _____ has no edges and no corners.

d) The information we collect about things is called **data** _____.

e) We need **money** _____ to buy things.

Q2) Do as directed. [2x2=4]

a. Identify the shape of the following objects and write the name of the shapes.



CUBOID



CIRCLE

b. Find the total value of coins.

$$\text{₹5} + \text{₹10} + \text{₹2} = \text{₹} \boxed{17}$$

$$\text{₹10} + \text{₹10} + \text{₹1} + \text{₹5} = \text{₹} \boxed{26}$$

Q3) Solve and write the answers [3x2=6]

a. Look at the picture and write the correct information.

(Each  (figure) represents one pet)

i)Which pet sold most in number?






Ans: Dog

ii)Which pet sold least in number?

Ans: Sheep

iii) How many total pets sold in one month ?

Ans: 21

Animals in a pet shop	Number of animals sold in a month
Cat	
Dog	
Sheep	
Rabbit	
Parrot	

b) Tina goes to shop. She has 50 rupees. Which two items can she buy?



₹ 40



₹ 100



₹ 10



₹ 50



₹ 5

She can buy:

Item's name	Price
Pencil box	₹ 40
Pen	₹ 10
Total amount paid to the shopkeeper	₹ 50

VBQ: We should save money for future.

TRUE

FALSE




LIVE WORKSHEET ON DATA HANDLING

<https://www.liveworksheets.com/ld1560349xt>

<https://www.liveworksheets.com/vr1552385ie>

SUB	HOME ASSIGNMENT
Mathematics	Practice chapters 12, 13 and 15 for Annual Assessment

LEARNING OUTCOME :



The learners are now able to do the practice work for Annual Assessment by themselves.

THANKING YOU
ODM EDUCATIONAL GROUP