

SESSION : 7

CLASS : I

SUBJECT : MATHEMATICS

CHAPTER NUMBER:6



CHAPTER NAME :ADDITION

**SUBTOPIC : 6.6 ADDITION OF TWO 3-DIGIT NUMBERS
(WITH CARRY OVER)**

CHANGING YOUR TOMORROW

LET'S HAVE A QUICK RECAP

ADD AND CHOOSE THE CORRECT OPTION



$$\begin{array}{r} 47 \\ + 29 \\ \hline 76 \end{array}$$

- 98
- 51
- 76
- 88

ADD AND
DRAG THE
CORRECT
ANSWER

8 5

6 3

Tens | Ones



4


9

+ 2

4

7 3

9 5



ADDITION OF TWO 3-DIGIT NUMBERS (WITHOUT CARRY)

Add 435 and 213


Step 1- add the ones place digits and write the sum in ones column

Step 2- Add the tens place digits and write the sum in tens column

Step 3- Now add hundreds place digits and write the sum in hundreds column

+







H	T	O
6	4	8



COVER ONES AND TENS PLACE AND DRAW LINES FOR HUNDREDS PLACE DIGITS

So, $435 + 213 = 648$

ADD AND CIRCLE THE CORRECT ANSWER

H	T	O
		
		

8

7

9

879

187

790

ADD AND HELP KITTY TO REACH THE CORRECT ROCK

$$\begin{array}{c} 231 \\ + 345 \\ \hline 576 \end{array}$$

231 + 345 = 176

$$\begin{array}{r} 231 \\ 345 \\ \hline 576 \end{array}$$



= 576

= 276

c.w Do in Maths Note Book (copy)

Exercise

Add the following :

1) **H T O**

3 4 2

+ 2 1 0

5 5 2

2) **H T O**

4 3 7

+ 2 6 1

6 9 8

3) **H T O**

3 7 5

+ 2 1 0

5 8 5

c.w Do in Maths Note Book (copy)

4)

	H	T	O
	7	8	5
+	2	1	4
	9	9	9

5)

	H	T	O
	1	3	3
+	4	0	0
	5	3	3

6)

	H	T	O
	7	0	1
+	1	2	0
	8	2	1

SUB	HOME ASSIGNMENT
Mathematics	Practice book page 54 (Any 5 sums)

LEARNING OUTCOME :

The learners are now able to add different 3 - digit numbers by using different methods.

THANKING YOU
ODM EDUCATIONAL GROUP