

Chapter- 11

Measurement

WORKSHEET

Q1. Write 'True' for correct statement and 'False' for false statement.

a. An elephant is heavier than a tiger. T

b. Giraffe is shorter than deer. F

c. Monday comes just after Sunday. T

d. A leap year has 29 days. T

e. A long hand is also called a minute hand. T

Q2. Do as directed.

a. Write the time shown on the clock.



9 0' clock



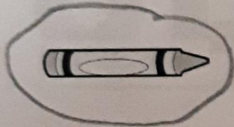

5 0' clock

b. Circle the following.


i. The animal farthest to the tree.



ii. Shortest object.




c. Tick the object which has more capacity and cross the object which has the least capacity in the group.



d. Colour the months in green which are having 31 days and yellow which are having 30 days.

JUNE	MARCH	APRIL
JULY	FEBRUARY	AUGUST
SEPTEMBER	MAY	NOVEMBER

e. Draw the two hands of the clocks to tell the given time.



6 'O clock



3 'O clock