

Chapter- 7

# GEOMETRY

## WORKSHEET



I. Fill in the blanks :

- a) The 2-D shape has two \_\_\_\_\_.
- b) A shape that has 3 sides is Triangle.
- c) There are \_\_\_\_\_ faces of a cube. 6
- d) The \_\_\_\_\_ 3-D shape has no vertex but has flat faces. Cone

II. Do as directed


- A) Draw a curved line and a straight line.
- B) Draw a hexagon and a rhombus.

C) Fill up.

SHAPES		
NAME	<u>Cuboid</u>	<u>Cone</u>
FLAT FACES	<u>6</u>	<u>1</u>
VERTICES	<u>8</u>	<u>1</u>
STRAIGHT EDGES	<u>12</u>	<u>0</u>

D) Find out.

- 1) What is the distance from your house to your aunt's house?
- 2) What is the distance from your aunt's house to the milk booth?
- 3) What is there opposite to the shopping mall?
- 4) Everyday how many kilometers do you need to walk to go to school and return back from the school?



----- END -----


D.

a)1- Distance from my house to my aunt's house is 6 Km.

a)2. Distance from my aunt's house to milk booth is 1 Km.

a)3. The opposite of shopping mall is temple.

a)4. The kilometres I need to walk to go to school and return back from the school is 2 Km.

- 1) What is the distance from your house to your aunt's house?
- 2) What is the distance from your aunt's house to the milk booth?
- 3) What is there opposite to the shopping mall?
- 4) Everyday how many kilometres do you need to walk to go to school and return back from the school?

— END —