

## Worksheet

1. Fill in the blanks.

a) The 2-D shape has two dimension.

b) A shape that has 3 sides is Triangle.

c) There are 6 faces of a cube.

d) The cylinder 3-D shape has no vertex but has flat faces.

2. Do as directed:

A) Draw a curved line and a straight line.

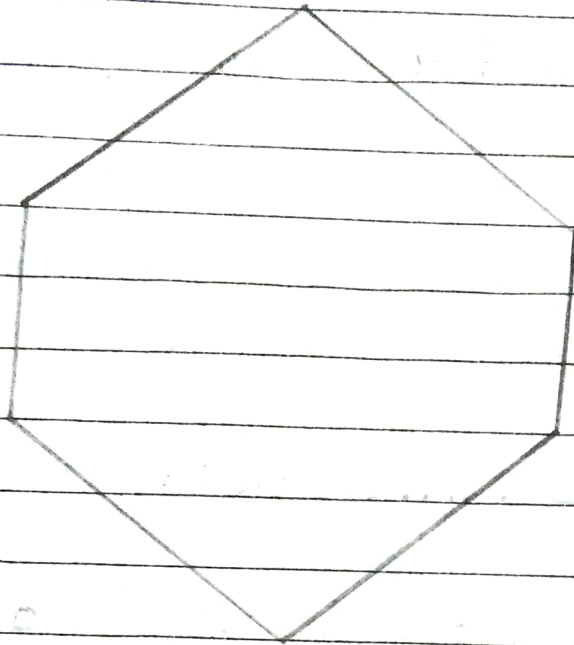


straight line

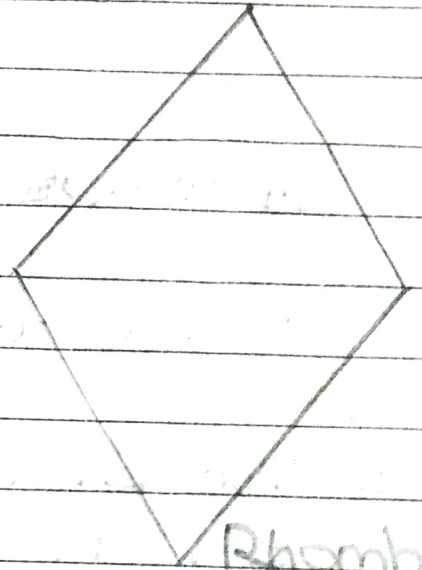


curved line

B) Draw a hexagon and a rhombus





Hexagon



Rhombus

C) Fill up.

|                |                                                                                     |                                                                                       |
|----------------|-------------------------------------------------------------------------------------|---------------------------------------------------------------------------------------|
| Shapes         |  |  |
| Name           | cuboid                                                                              | cone                                                                                  |
| Flat faces     | 6                                                                                   | 1                                                                                     |
| Vertices       | 8                                                                                   | 1                                                                                     |
| Straight edges | 12                                                                                  | 0                                                                                     |

D) Find out.

1) What is the distance from your house to your aunt's house?

Ans- The distance from my house to my aunt's house is 6 kms.

2) What is the distance from your aunt's house to the milk booth?

Ans- The distance from my aunt's house to milk booth is 1 km.

3) What is there opposite to the shopping mall?

Ans- The opposite of the shopping mall is Temple.

4) Everyday how many kilometers do you need to walk to go to school and return back from school?

Ans- Everyday I need 4 kilometers to walk to school and return back from school.