

# DIVISION

1 Circle the correct option

a Division is repeated (subtraction / addition)

b 12 toffees shared among 4 friends  
Each one gets (three / four) toffees.

c The answer of division is (quotient / remainder)


d In  $18 \div 3 = 6$ , 18 is (dividend / divisor)

e The symbol of division is ( $\div$  /  $\times$ )

2 Do as directed.

a Write the facts.

5 boys share 10 apples. The facts are:

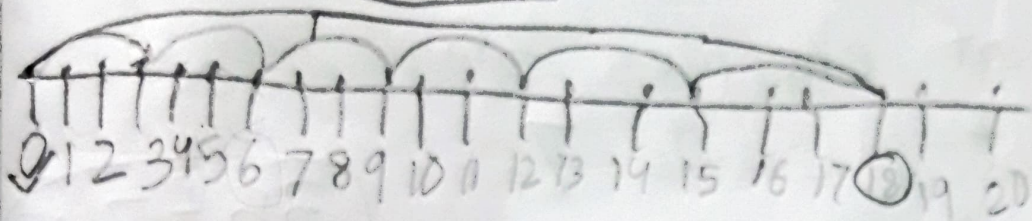


$$10 \div 5 = \underline{2} \text{ apples.}$$

$$2 \times 5 = 10 \text{ apples}$$

b Divide 18 by 3.

$$18 \div 3 = \boxed{6}$$



c Show as repeated subtraction.

6 monkeys shared 12 mangos equally.  
How many mangos did each monkey get?

T O

12

-6


6

-6

0

→ ①

→ ②



Each monkey got 2 mangos.

3) Solve the word problems.

5 girls share 25 lollipops equally.  
How many lollipop does each child get?

Number of lollipops 25

Number of girls 5

Number of lollipop each child gets  $25 \div 5 = 5$

Maya puts 35 cherries in 7 packets.  
How many cherries are there in each packet?

Number of cherries 35

Number of packets 7

Number of cherries in each packet  $35 \div 7 = 5$