

a) Choose the correct answer and
fill in the blanks.

a- Multiplication is repeated
addition . (addition, subtraction,
division)

b- 3 groups of 5 is equal to
 3×5 . ($5+5+5$, $3+5$, 3×5)

c- 4 taken 6 times make 24
(24, 2, 20)

d- $6+6+6$ can also be written
as 3×6 . (3×6 , 6×3 , $3+6$)

e 5 Fives are _____
(2 tens, 5 ones, 5 tens, 2 tens
 2 tens 0 one)

Q2 Match the following.

a 7 groups of 5 — (a) seventy-two

b 5 taken 4 times — (b) Eighteen

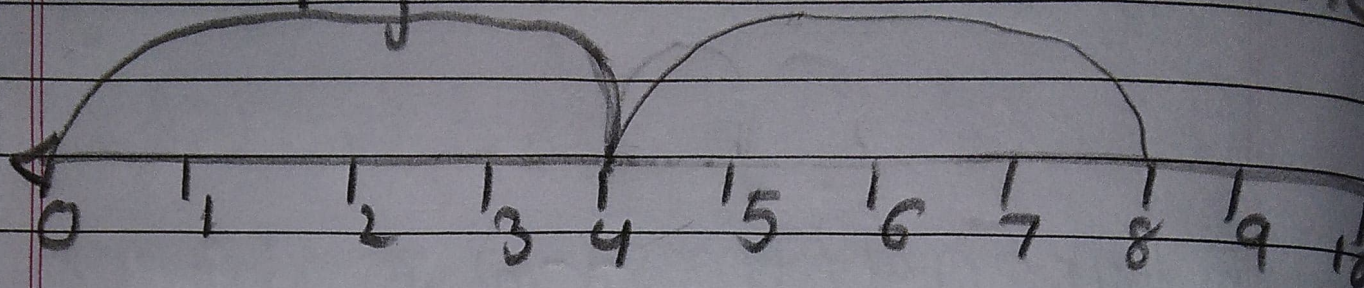
c Nine twos are — (c) Twenty

d 8 times 6 — (d) Thirty-five

e 9×8 — (e) Forty-eight



Q3 Do as directed.

a Multiply on a number line



$$\underline{4} \times \underline{2} = \underline{8}$$

b Fill in the blanks.



3

groups of

4

apples = 12


$$\underline{3} \times \underline{4} = \underline{12}$$

c Multiply and write the answer.

$$\begin{array}{r} T \quad 0 \\ 4 \quad 3 \\ \times \quad 2 \\ \hline 8 \quad 6 \end{array}$$

$$\begin{array}{r} H \quad T \quad 0 \\ 2 \quad 3 \quad 4 \\ \times \quad 2 \\ \hline 4 \quad 6 \quad 8 \end{array}$$

d. There are 5 flowers in a pot. How many flowers will be there in 6 such pots?



$$\begin{array}{r} T \quad 0 \\ 6 \\ \times \quad 5 \\ \hline 3 \quad 0 \end{array}$$

is 30

The answer

e multiply and write the product.

$$\begin{array}{r} \text{---} \\ 30 \\ \times 4 \\ \hline 1192 \end{array}$$

$$\begin{array}{r} \text{---} \\ 100 \\ \times 53 \\ \hline 318 \end{array}$$