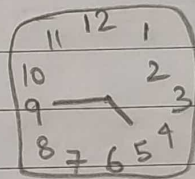
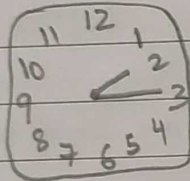


1. Fill in the blanks

- a) Thursday comes after Wednesday.
- b) July comes before August.
- c) Republic day is celebrated on 26 th of January.
- d) The longer hand is the minute hand.
- e) The time from midnight to noon is known as a.m.

2. Do as directed.

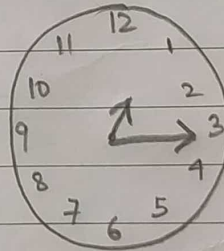
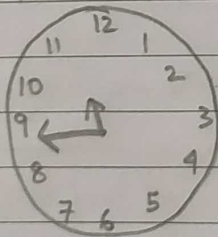
a) write the time shown by each clock.



Quarter past 2

Quarter to 5

b) Draw the hands



Quarter to 11

Quarter Past 1

c) which days are known as weekend? write the names

Saturday

Sunday

d) Write the given months in the correct tray:

AUGUST NOVEMBER
 FEBRUARY

Having 31 days
August

Having 30 days
November

e) Write the missing days.

MONDAY, Tuesday, WEDNESDAY, Thursday, FRIDAY.

3. Match the following.

A

B

