

MATHS WORKSHEET

ch-9 → Measurement

Page No.:

Date:

youva

1. Choose correct answers and fill in the blanks.

a) The body parts are the non-standard units of length.
i) arbitrary ii) non-standard

b) Length of an object may be measured by some others
smaller objects.
i) smaller ii) bigger

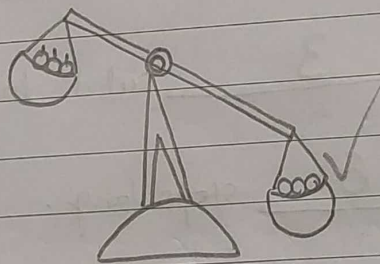
c) Objects which are used to measure the length of others objects
are called arbitrary.
i) arbitrary ii) standard

d) The pan having more weight moves down.
i) up ii) down


e) Weight gives us an idea of whether an object is heavy
or light.
i) length ii) weight

2. Do as directed


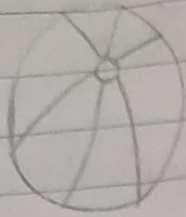
i) Tick the heavier object





ii) Circle the lighter object



iii) colour the heaviest object.

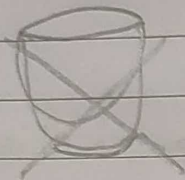


iv)



capacity of mug is equal to that of 8 bowls.

v) cross the container whose capacity is maximum.



3. i) Fill in the blanks after measuring objects using given arbitrary and non-standard units.


a) your pencil box is 5 erasers long.

b) width of the doors is 3 cubits long.

c) my room's length is 6 steps long.

ii) Draw the pictures.

A cubit



A handspan

