



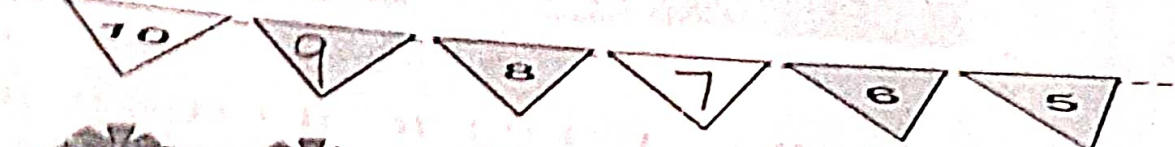
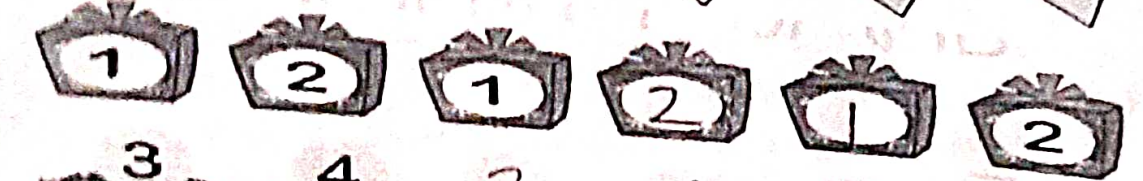






Chapter - 11

PATTERNS

WORKSHEET

1. Complete the following :

1. 
2. 
3. 
4. 
5. 
6. 
7. 
8. 
9. 
10. 

ii. Do as directed :
Find the pattern rule.

1. 6, 8, 10, 12, 14, 16, 18, 20 2 Number's skip
2. 56, 49, 42, 35, 28, 21, 14, 7 7 table backward
3. 45, 40, 35, 30, 25, 20, 15, 10 Less 5 from each Number
4. 12, 15, 18, 21, 24, 27, 30, 33 Add 3 to each number
5. 11, 22, 33, 44, 55, 66, 77, 88 11 Number's skip

----- END -----

EDUCATIONAL GROUP

FOR ALL YOUR EDUCATIONAL NEEDS