

Chapter- 7

GEOMETRY

WORKSHEET

I. Fill in the blanks :

- a) The 2-D shape has two dimensions.
- b) A shape that has 3 sides is Triangle.
- c) There are 6 faces of a cube.
- d) The Cylinder 3-D shape has no vertex but has flat faces .

II. Do as directed



A) Draw a curved line and a straight line.



B) Draw a hexagon and a rhombus.

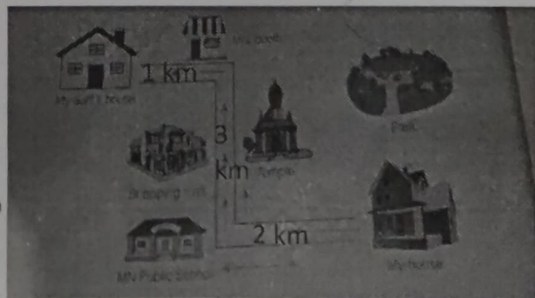


C) Fill up.

SHAPES		
NAME	Cuboid	Cone
FLAT FACES	6	1
VERTICES	8	1
STRAIGHT EDGES	12	0

D) Find out.

- 1) What is the distance from your house to your aunt's house?
Ans: 6 km
- 2) What is the distance from your aunt's house to the milk booth?
Ans: 1 km
- 3) What is there opposite to the shopping mall?
Ans: Temple
- 4) Everyday how many kilometers do you need to walk to go to school and return back from the school?
Ans: 4 km



----- END -----