


Chapter - 7 Geometry

WORKSHEET



1. Fill in the blanks :

a. The 2-D shape has two diagonals

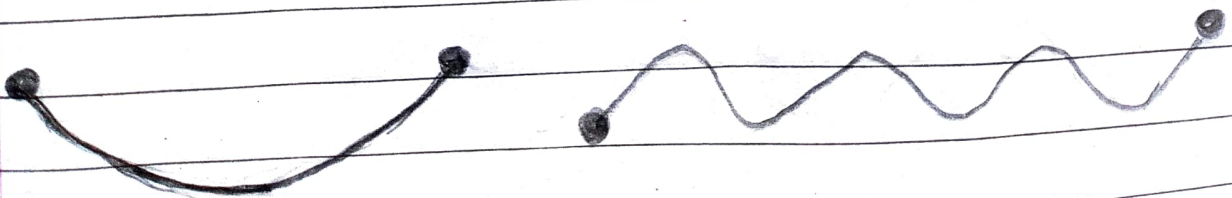
b. A shape that has 3 sides is
triangle.

c. There are 3 flat faces of a
cube.

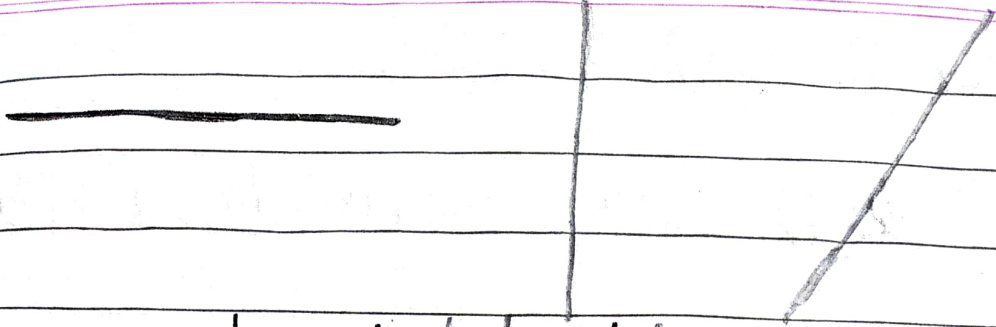
d. The cylinder 3-D shape has no
vertices but has flat faces.

11. Do as directed.

A. Draw a curved line and a straight
line.

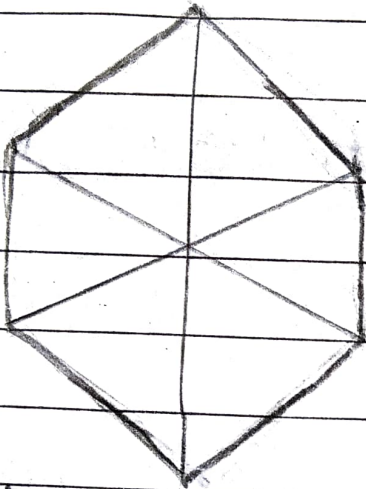


Curved line

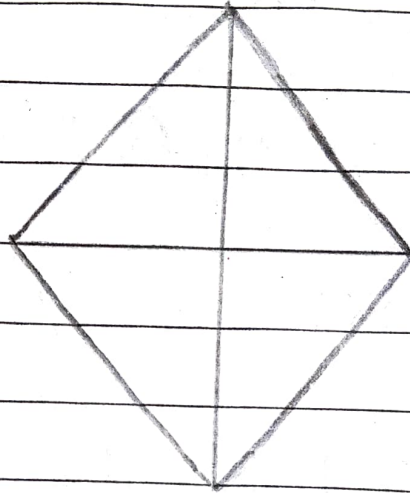


Straight line

B. Draw a hexagon and a rhombus.





Hexagon



Rhombus

C. Fill up:

Shapes



Name

Cuboid

Cone

Vertices

8

1

Flat faces

6

1

Straight edges

12

0

Q. Find out.

1. The distance from your house to your aunt's house is $2 + 3 +$

$1 = 6$ km

2. The distance from your aunt's house to the milk booth is

1 km.

3. There opposite to the shopping mall is Temple.

4. Everyday I need to walk to go to school and return back from school 4 km.