

Chapter- 8

Man: The Living Machine

WORKSHEET

A. NAME THE SYSTEM RESPONSIBLE FOR.

1. Circulation of blood Circulatory system
2. Breathing Respiratory system
3. Giving shape to the body Skeletal system
4. Breaking food for absorption digestive system
5. Receiving messages from nerves nervous system

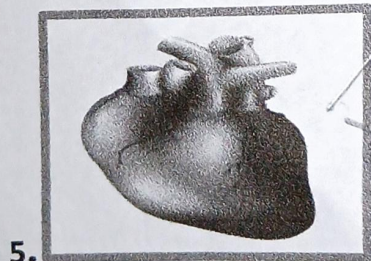
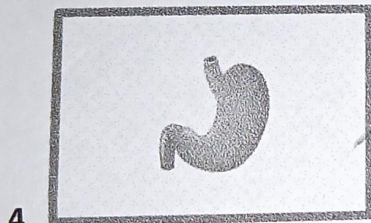
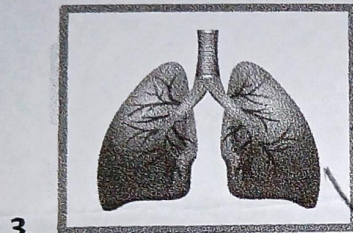
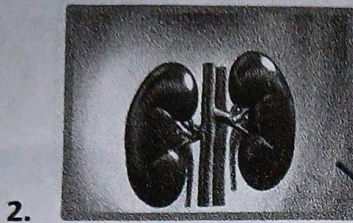

B. TICK THE CORRECT ANSWER.

1. The skin, eyes and lungs are examples of _____.
 a) organ system b) organs c) cells
2. The _____ pull the bones to make them move.
 a) muscles b) lungs c) kidneys
3. Digestion begins in the _____.
 a) mouth b) stomach c) small intestine
4. Which of these organs controls all the systems in the body?
 a) heart b) kidney c) brain
5. The _____ pumps blood to different parts of the body.
 a) liver b) heart c) both a & b

C. FILL IN THE BLANKS.

1. The food that cannot be digested goes to the large intestine.
2. The heart pump blood to all parts of the body.
3. The kidneys remove waste.
4. The nervous system consists of the brain, the spinal cord and the nerves.
5. The respiratory system supplies oxygen to various parts of our body

D. MATCH THE ORGAN TO THE SYSTEM IT BELONGS.



Digestive System

Nervous System

Excretory System

Circulatory System

Respiratory System

