

Name - Aniket Sasmal. Class - II (Sec - B)
Subject - Maths (Chapter - 8: Geometry)
School No: 7719

Chapter-8

Geometry

WORKSHEET

1. Choose the correct answer and fill in the blanks.

a. A triangle has 3 vertices.

- i. 3 ✓ ii. 4 iii. 5

b. The square has 4 equal sides.

- i. cuboid ii. cube iii. square ✓

c. A hexagon has 6 sides.

- i. triangle ii. rectangle iii. hexagon

2. Write TRUE for correct answer and FALSE for wrong answer.

i. A rectangle has 2 equal diagonals. (False)

ii. A sphere has 2 flat faces. (False)

iii. We draw straight lines by using a ruler. (True)

3. Do as directed.

i. Name the shapes



Triangle



Cube

ii. Identify the shapes of given objects.



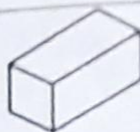
Cube



Cuboid

iii. Circle the object having:


1 vertex




Only flat faces



iv. Write straight line or curved line.



curved lines



straight lines


4. Count and write the correct numbers.



Slanting lines 7

Horizontal lines 12

Vertical lines 11



Triangles 9

Rectangles 11

Circles 6

X X X