

Worksheet

NAME - RALLAVI NAYAK

SCHOOL No - 5826

STD - V

SEC - C

DATE - 8.6.21

I. Fill in the blanks :

1. A globe is a representation of the Earth.
2. Physical map shows different landforms in an area.
3. The science of making maps is called cartography.
4. Map is a representation of the earth, or a part of it, on a flat Surface.
5. A map scale shown as a line with divisions marked on it is called Linear scale.

II Cross out the wrong word from the bracket to make the sentence correct.

1. (A globe / ~~a map~~) is a model of the earth.
2. A map which shows the climate of a ~~country~~ country is a (~~physical map~~ / thematic map).
3. Pictures or signs used in a map to represent something from the real world are (~~legend~~ / symbols).
4. A book of maps is called (~~atlas~~ / dictionary).
5. (Yellow / ~~red~~) colour shows plateaus on map.

III Choose the correct answer :

1. Which of these maps will always have some errors?

a. Map of your house

b. Map of your school

c. Map of your neighbourhood

d. Map of the world

2. Why does a political map show?

a. Features such as mountains, plains and rivers.

b. Roads, railway and airline routes.

c. Boundaries of countries, states and important cities

d. Number of seats won by political parties in an election.

3. On a map, 1000 km is ~~is~~ shown as 1 cm. The scale of the map is:

a. 1000 km : 1 CM

b. 1 CM : 1000 km

c. 100 km : 1 CM

d. 1 CM : 100 km

4. Blue colour in a map always shows:

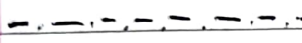
a. Plain land

b. Hills

c. Water bodies


d. Marshy land

5. Which of these symbols represents a boundary between countries?

a. 

b. 

c. 

d. 


IV. Match it :-

1. Light blue a. railway line (5)

2. Physical maps b. North (3)

3. Arrow marked Non map c. Shallow water (1)

4. Plains d. mountains & rivers (2)

5.  e. Green (4)