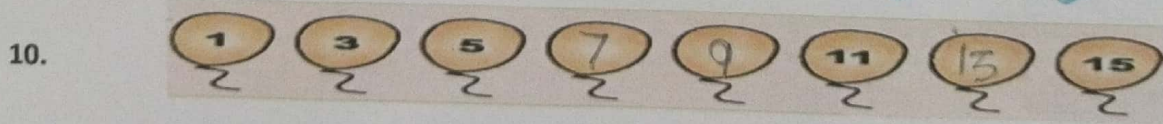


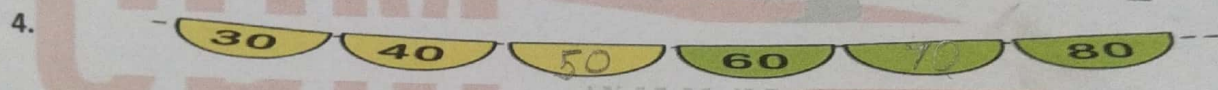
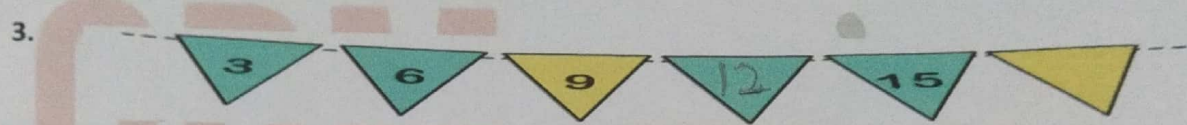


Chapter- 11

PATTERNS

WORKSHEET

I. Complete the following :




II. Do as directed :

Find the pattern rule.

1. 6, 8, 10, 12, 14, 16, 18, 20 Start at 6 add 2 each time.
2. 56, 49, 42, 35, 28, 21, 14, 7 Start at 56 subtract 7 each time.
3. 45, 40, 35, 30, 25, 20, 15, 10 Start at 45 subtract 5 each time.
4. 12, 15, 18, 21, 24, 27, 30, 33 Start at 12 add 3 each time.
5. 11, 22, 33, 44, 55, 66, 77, 88 Start at 11 add 11 each time.

ODM



EDUCATIONAL GROUP

Changing your Tomorrow