

Chapter- 7

# GEOMETRY

## WORKSHEET


I. Fill in the blanks :

- a) The 2-D shape has two dimension.
- b) A shape that has 3 sides is triangle.
- c) There are flat faces of a cube.
- d) The cylinder 3-D shape has no vertex but has flat faces .



II. Do as directed

A) Draw a curved line and a straight line.

B) Draw a hexagon and a rhombus.




C) Fill up.

|                |  |  |
|----------------|--|--|
| SHAPES         |  |  |
| NAME           | Cuboid   | Cone   |
| FLAT FACES     | 6  | 1  |
| VERTICES       | 8  | 1  |
| STRAIGHT EDGES | 12   | 0  |

D) Find out.

- 1) What is the distance from your house to your aunt's house? 6 km
- 2) What is the distance from your aunt's house to the milk booth? 1 km
- 3) What is there opposite to the shopping mall? Temple
- 4) Everyday how many kilometers do you need to walk to go to school and return back from the school? 4 km



--- END ---