

Name - Aniket Sasmal · Class - 2 (Sec-B)
School NO: 7719

Chapter-13
Time


WORKSHEET

1. Fill in the blanks.


- a. Thursday comes after Wednesday.
- b. July comes before August.
- c. Republic Day is celebrated on 26 th of January.
- d. The longer hand is the minute hand.
- e. The time from midnight to noon is known as a.m.

2. Do as directed.

a. Write the time shown by each clock.



2:15



4:45

b. Draw the hands according to the given time.



Quarter to 11



Quarter past 1



c. Which days are known as weekend?

Write the names in the given box.

Saturday

Sunday

d. Write the given months in the correct tray.



e. Write the missing days.

MONDAY, TUESDAY, WEDNESDAY, THURSDAY, FRIDAY.

3. Match the followings.

A

B

Saturday

3:30

Hour hand

366 days

Half past 3

1 year

Leap year

6th day of the week

12 months

Shorter hand.

XXXX