



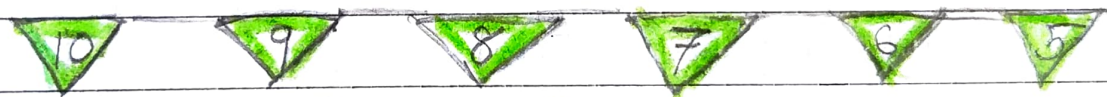




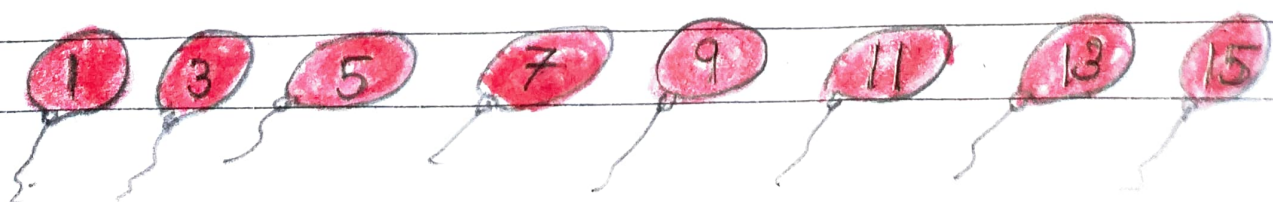


Worksheet Chapter - 11

Patterns

1. Complete the following :-

1. 
2. 
3. 
4. 
5. 
6. 
7. 
8. 
9. 
10. 

11. Do as directed

Find the pattern rule :-

1. 6, 8, 10, 12, 14, 16, 18, 20, 22, 24, 26, 28,
30, 32, 34, 36

2. 56, 49, 42, 35, 28, 21, 14, 7, 0, -7, -14, -21,
-28, -35, -42, -49, -56,

3. 45, 40, 35, 30, 25, 20, 15, 10, 5, 0, -5,
-10, -15, -20, -25, -30

4. 12, 15, 18, 21, 24, 27, 30, 33, 36, 39, 42,
45, 48, 51, 54, 57

5. 11, 22, 33, 44, 55, 66, 77, 88, 99, 110, 121,
132, 143, 154, 165, 176.