

MATHS WORKSHEET ⇒ ch-8 Geometry

1. Choose correct answers.

a. A triangle has 3 vertices.

b. The square has 4 equal sides.

c. A hexagon has 6 sides.

2. Write TRUE/FALSE

i. A rectangle has 2 equal diagonals. True

ii) A sphere has 2 flat faces. False

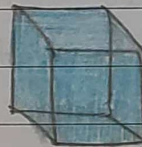
iii) we draw straight lines by using a ruler. True

3. Do as directed

i) Name shapes



Triangle



cube

ii) Identify shapes



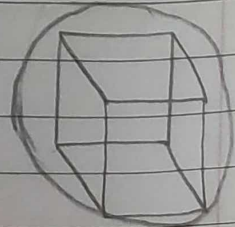

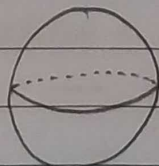
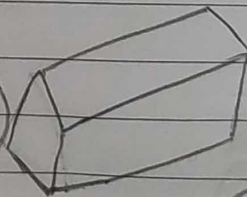

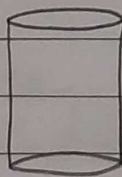
cube



cuboid

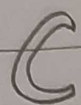
iii) circle the object having :-

1 VERTEX

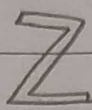


only flat faces

iv) write straight line or curved line .

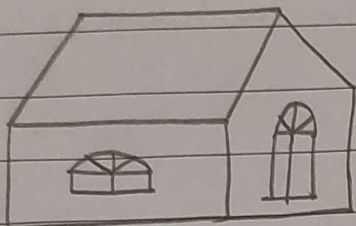


Curved line




straight line

4. count and write the correct numbers .



Slanting lines	<u>7</u>
Horizontal lines	<u>5</u>
vertical lines	<u>5</u>



Triangles	<u>9</u>
Rectangles	<u>11</u>
Circles	<u>6</u>

— x —