

19.11.21

ADYASHA GOUDA
Class - 3 - C
School No - 5785

classmate

Date

Page

Worksheet ch-7 'GEOMETRY'

I. Fill in the blanks:

a) The 2-D shape has two dimensional


b) The shape that has 3 sides is triangle.

c) There are 6 faces of a cube.

d) The Cylinder 3-D shape has no vertex but has flat faces.

II. Do as directed.

A Draw a curved line and a straight line.



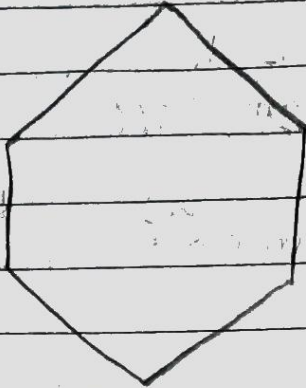
curved
line

straight
line




Draw a hexagon and a rhombus.

1.



Hexagon



2.



Rhombus

C

Fill up .

	cuboid	cone
Shapes		
Flat Faces	6	1
Vertices	8	1
Straight edges	12	0

D Find out

1 What is the distance from your house to your aunt's house?

ans $1 \text{ km} + 3 \text{ km} + 2 \text{ km} = 6 \text{ km}$ /
 $2 \text{ km} + 3 \text{ km} + 1 \text{ km} = 6 \text{ km}$

2 What is the distance from your aunt's house to the Milk booth?

ans 1 km

3 What is there opposite to the shopping mall?

ans: Temple

Adyasha Gouda

3-C

classmate

Date _____

Page 5

Q: Everyday how many kilometres do you need to walk to go to school and return back from the school?

ans: 4 km