

Geometry

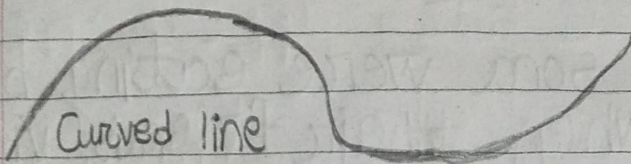
PAGE NO.

Date: / / 20

- I
- A. The 2-d shape has 2 dimensions
 - B. A shape that has 3 sides is triangle.
 - C. There are 6 faces of a cube.
 - D. The sphere 3-d shape has no vertex but has flat faces.

II.

(A)

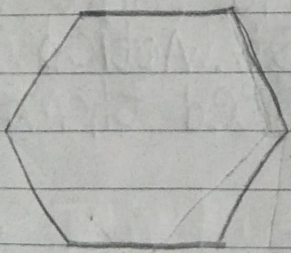


Curved line

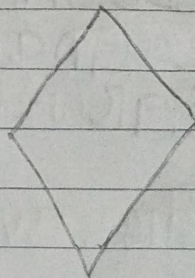


Straight line

(B)

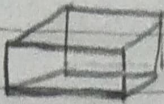
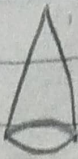


Hexagon



Rhombus

C.

Shapes		
Names	Cuboid	Cone
Flat faces	6	1
Vertices	8	1
Straight edges	12	0

D

1. What is the distance from your house to your aunt's house? 6 km
2. What is the distance from your aunt's house to the milk booth? 1 km
3. What is there opposite to the shopping mall? Temple
4. Everyday how many kilometers do you need to walk to go to school and return back from the school? 4 km