



The 2D Shape has two _____

A Shape that has 3 sides is

Triangle

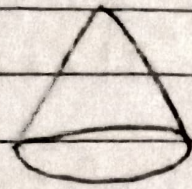
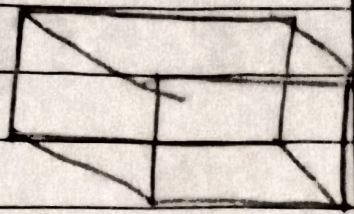
There are six faces of a cube.

The cylinder 3-D Shape has no vertex but has flat faces.



straight line

Shape



name

cuboid

cone

flat faces

6

1

vertices

8

1

straight edges

12

0

The distance from our house to our aunt's house is 6 km

distance from our aunt's house to milk booth is 1 km

The shopping mall's opposite is temple.

Everyday 4 km to walk to go to school and return back from the school to home.