

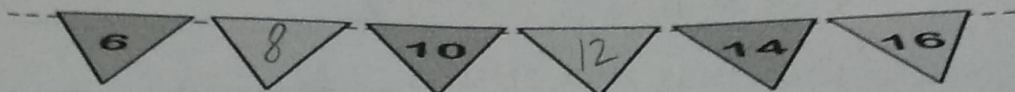
Chapter- 11

PATTERNS

WORKSHEET

I. Complete the following :

1.




2.



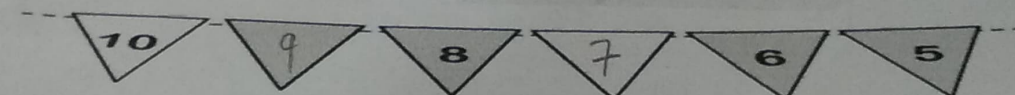
3.



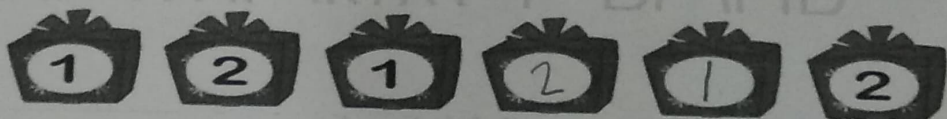
4.




5.




6.




7.



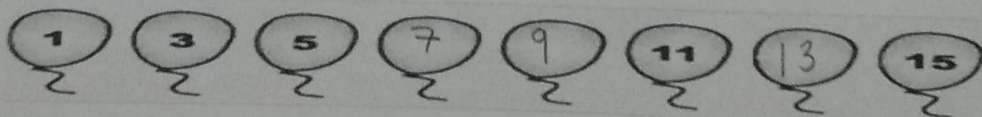
8.



9.



10.



II. Do as directed :

Find the pattern rule.

1. 6, 8, 10, 12, 14, 16, 18, 20 Start from 6 go alternate numbers.
2. 56, 49, 42, 35, 28, 21, 14, 7 Start from 56 decrease 7 numbers.
3. 45, 40, 35, 30, 25, 20, 15, 10 Start from 45 decrease 5 numbers.
4. 12, 15, 18, 21, 24, 27, 30, 33 Start from 12 increase 3 numbers.
5. 11, 22, 33, 44, 55, 66, 77, 88 Start from 11 increase 11 numbers.

--- END ---

ODM
EDUCATIONAL GROUP

Changing your Tomorrow