

Ch-11 Measurement

Page No. : _____

Date :

Q1 Write "True" for correct and "False" for incorrect statement.

a. An elephant is heavier than a tiger.

(True)

b. Giraffe is shorter than deer. (False)

c. Monday comes just after Sunday.

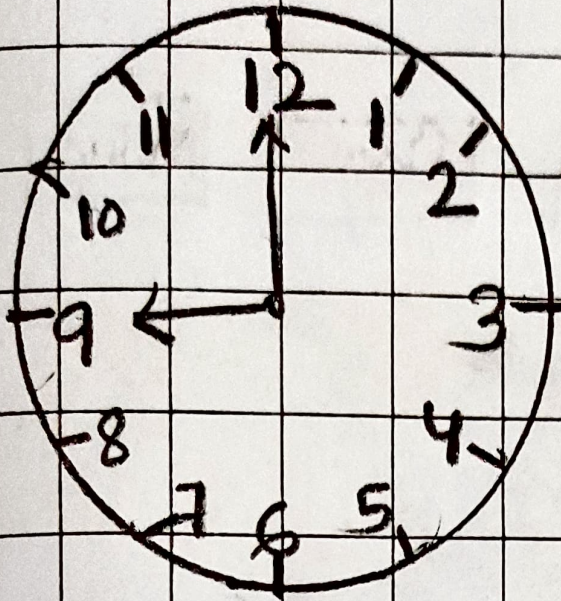
(True)

d. A leap year has 29 days. (False)

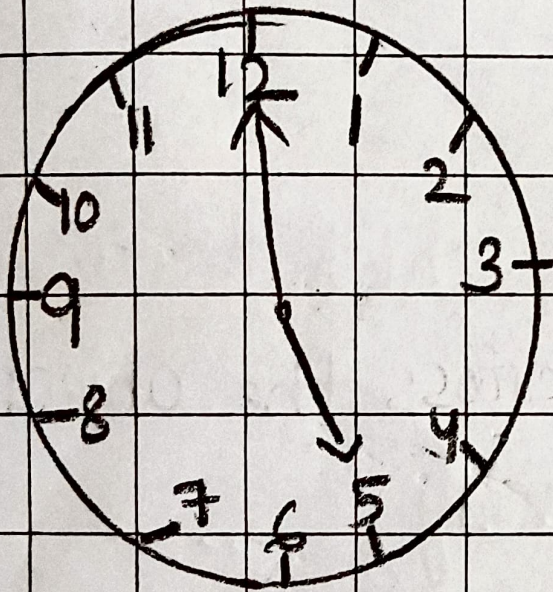
e. A long hand is also called hour hand. (True)

Q2 Do as directed

(a) write the time on the clock :-




→ 9 '0 clock



→ 5 '0 clock

b. circle the following

⓪ The animal farthest to the tree






cat

Dog


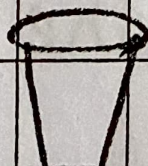


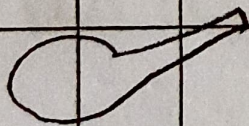
mouse

Rabbit

(ii) Shortest object



(c) Tick the object which has more capacity and cross the object which has least capacity



(d) colour the month in green which are having 31 days and yellow which are having 30 days.

JUNE	MARCH	APRIL
JULY	FEBRUARY	AUGUST
SEPTEMBER	MAY	NOVEMBER

(e) Draw the hands to given time:

