


Chapter-2

NUMBERS WORKSHEET



Q1) Write the names of the following
number:

(a) 133 - one hundred thirty-three

(b) 341 - three hundred forty-one

Q2) Write the following figures:

(a) Nine hundred fifty - 150

(b) Three hundred twenty seven - 327

Q3) Put the correct sign ($>$ $<$ $=$)

269 $>$ 200

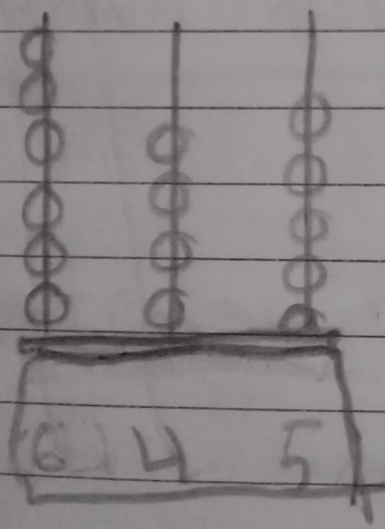
233 $>$ 222

Q4) Represent the given numbers on
an abacus.

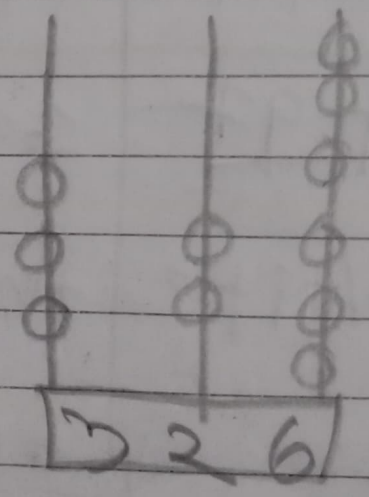
a) 645

b) 326

H T O



H T O



Q5) Write the missing numbers as
directed.

a) Count in forward

112, 113, 114, 115, 116, 117, 118, 119
120

COUNT IN REVERSE

660, 659, 658, 657, 656, 655,
654, 653, 652, 651

Q Write the number that comes before the given number.

(i) ~~797~~ 798

Q Write the number that comes after the given numbers

(i) 954 955

Q 345 comes in between

344 345 346

Q.9) Circle the greatest number.

(i) 552, (867), 345, 253

Q.10) Circle the smallest number.

552, 551, 556, (550)

Q.11) Write the place value of the underlined digit.

(i) 821 - 2 _____ = 20

Q.12) Write the face value and place value of the underlined digit.

107. Face value _____ = Place value _____

13) write the numbers in compact form

1) $600 + 50 + 4 = 654$

14) write the expanded form of the number

1) $687 = \underline{6}$ hundreds $\underline{8}$ tens $\underline{7}$ ones

5) write the number in standard form

4 hundreds + 9 tens + 4 ones = 494