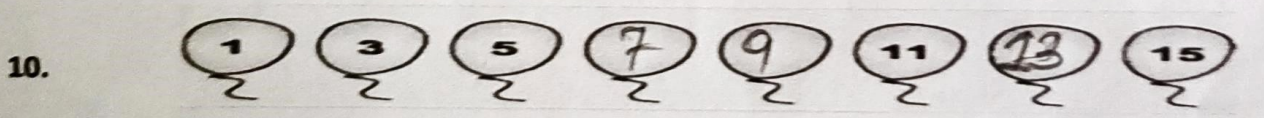



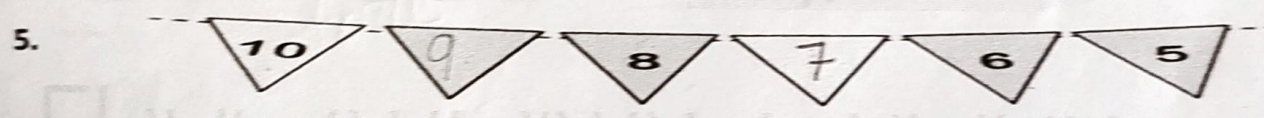

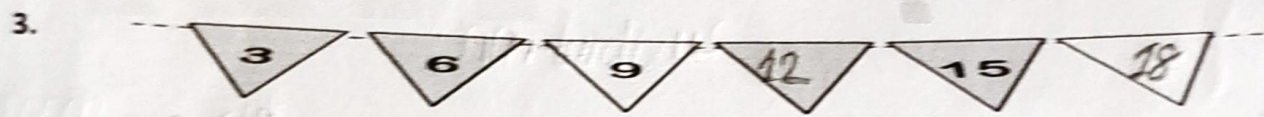



Chapter- 11

PATTERNS

WORKSHEET

I. Complete the following :



1. Do as directed :

Find the pattern rule.

1. 6, 8, 10, 12, 14, 16, 18, 20 Start with 6 and add 2 each
2. ^{time}56, 49, 42, 35, 28, 21, 14, 7 start with 56 and subtract 7 each
3. ^{time}45, 40, 35, 30, 25, 20, 15, 10 Start with 45 and subtract 5 each
4. ^{time}12, 15, 18, 21, 24, 27, 30, 33 start with 12 and add 3 each
5. ^{time}11, 22, 33, 44, 55, 66, 77, 88 Start with 11 and add 11 each

--- END ---

OBM
EDUCATIONAL GROUP

Changing your Tomorrow