

Secondary (Worksheet)

1. Fill in the blanks.

a) Dimensional.....


b) Triangle

c) 6

d) Cylinder

11. Do as directed



A)



B)



C) Fill up.

Shapes		
Name	Cuboid	Trip
Flat faces	6	5
Vertices	8	6
Straight edge	12	9

D) Find out.

1. A. 9 No

2. A. 1 km

3. A. Triangle

4. A. 2 km