


Science

Chapter-9



Measurement (Worksheet)

A. Tick (✓) the corrects answers.

1. Millilitre ✓

2. Thermometre ✓

3. Standard ✓

4. Celsius ✓

5. Second

B Give two examples for each of the following

6. Handspan, Footspan 10. Fahrenheit Scal, Centigrade Scal

7. Common balance, Electronic balance

8. Dropper, Measuring cans

9. Clock, Watch Centigrade Scal

C. Rewrite the sentences after correcting the underlined words.

11. The tailor uses a measuring tape to take measurement.

12. 10 kilograms of sugar is longer than 2 kilograms of sugar.

13. The distance of school from our house is 5 kilometre.

14. Today's EVS teacher scolded Shradha as she joined the class 15 minutes late.


15. Pritham put the chocolate bar in the fridge last night. Now it would have been very cold.

D. Match column A with column B.

Column A


Column B

16.




You generally see me in sweets stall.

17.




I wake you up in the morning.

18.



I check your temperature when you have fever.

19.



I found around the neck of a tailor's shop.

20.



People use me to measure all.